

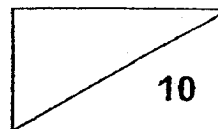
**CATHOLIC HIGH SCHOOL  
MATHEMATICS  
PRIMARY ONE  
AMODES : CHECKPOINT 5**

NAME : \_\_\_\_\_

DATE : \_\_\_\_\_

CLASS : \_\_\_\_\_

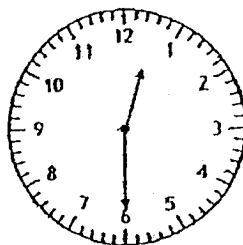
PARENT'S SIGNATURE : \_\_\_\_\_



**Section A**

Questions 1 to 6 carry 1 mark each. For each question, four options are given. One of them is the correct answer. Make your choice 1, 2, 3 or 4 and write your choice in the bracket provided. All diagrams are not drawn to scale. (6 marks)

1. Look at the clock below.



Which of the following statements is true?

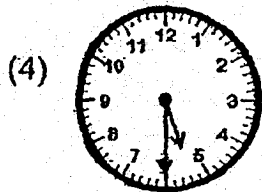
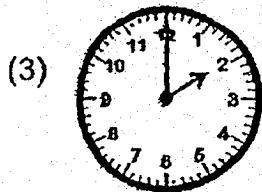
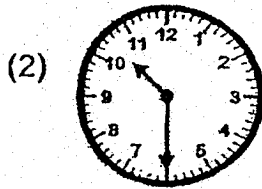
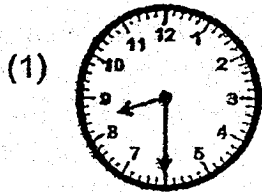
- (1) The time is 6 o'clock.
- (2) The time is 12 o'clock.
- (3) The time is half past 1.
- (4) The time is half past 12.

(       )

2. The table below shows Samy's timetable every Saturday.


Time	Activity
half past 9	Breakfast
?	Swimming lesson
12 noon	Lunch
2 o'clock	Piano lesson

Which of the following clock shows the time that he has his swimming lesson?



( )

3. What is the total amount of money shown below?



- (1) 40¢
- (2) 46¢
- (3) 55¢
- (4) 60¢

(      )

---

4. Mili has 15¢ in her wallet.  
How much more money does Mili need if she wants to buy a pencil?




- (1) 45¢
- (2) 55¢
- (3) 65¢
- (4) 75¢

(      )

5. Which of the following sets of coins below are needed by Ali to exchange with \$1?



6. Sumei has \$12 in her wallet.  
Which of the following shows what she has in her wallet?



( )

**Section B**

Do not write  
in this space

Questions 7 to 8 carry 2 marks each. Show your working clearly and write your answers in the spaces provided. For questions which require units, give your answers in the units stated. All diagrams are not drawn to scale. (4 marks)

7. Circle the correct number of coins to make 70¢.



8. Mrs Tan has \$90.  
She buys a dress for \$58.  
How much money does she have left?

$$\square \ominus \square = \square$$

Mrs Tan has \$ \_\_\_\_\_ left.

END OF PAPER

**EXAM PAPER 2018 (P1)**

**SCHOOL :CATHOLIC HIGH**

**SUBJECT : MATHEMATICS**

**TERM : Checkpoint 5**

Q1	Q2	Q3	Q4	Q5	Q6
4	2	3	1	4	1

Q7) 20¢ , 50¢

Q8)  $90 - 58 = 32$

