

Anglo-Chinese School (Junior)
Mathematics Bite-sized Assessment 1

Name: _____ ()

3 April 2018

Class: P1. _____


Parent's signature: _____

Questions	Skills and Concepts
1, 2	Counting to 10
3 to 6	Comparing and Ordering
7	Number Bonds
8 to 13	Addition and Subtraction
14, 15	Solving word problems involving addition and subtraction


A. Do these sums carefully.

1. Count and write the numeral in each box.


a)

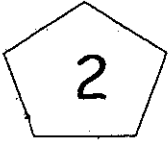
	
--	--

b)

	
--	--


2. Write in words.

a)  →

b)  →

3. Which is more?

Read the sentences carefully and fill in the blanks.



spiders

ants

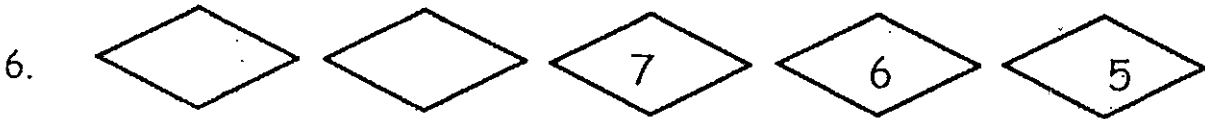
There are fewer _____ than _____.

4. Fill in the blanks.

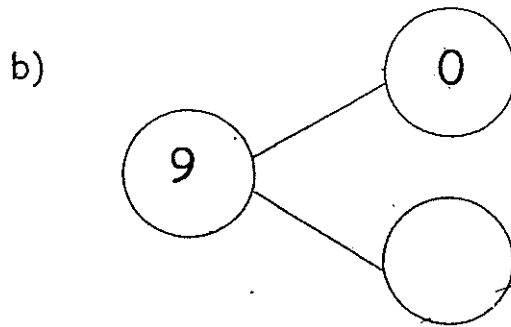
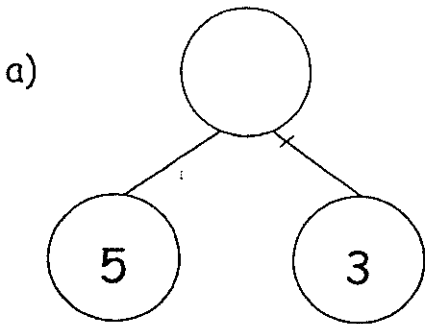
a) 1 more than 9 is _____.

b) 1 less than 3 is _____.

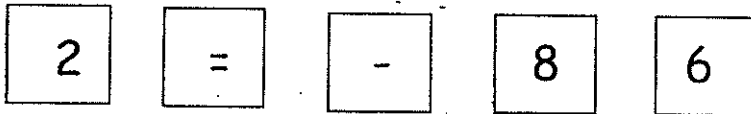
What comes next? Write the number.



7. Fill in the missing numbers in the number bonds.



8. Write a subtraction equation using the following.



B. Fill in the correct answer in each box.

9. $2 + 8 = \square$


10. $\square + 1 = 8$

11. $5 - 5 = \square$

12. $7 - \square = 2$

C. Complete a fact family for the picture.

13.



$$\square + \square = \square$$

$$\square + \square = \square$$

$$\square - \square = \square$$

$$\square - \square = \square$$

D. Read the story sums carefully and solve them.

14. Tim has 8 hamsters. 3 of them are brown.
How many of his hamsters are not brown?

$$\square \bigcirc \square = \square$$

_____ of Tim's hamsters are not brown.

15. Mother had some eggs in her bowl.
3 eggs broke.
She had 4 eggs left.

How many eggs did Mother have at first?

$$\square \bigcirc \square = \square$$

Mother had _____ eggs at first.



**CHECK YOUR
WORK!**

