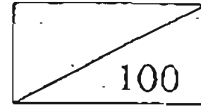


Nan Hua Primary School
End-of-Year Examination 2005
Mathematics
Primary One

Name : _____ ()

Marks :



Class : Pr. 1 _____

Date : 27 October 2005


Duration : 1h 30min

Parent's Signature

Section A (2 marks each)

Fill in the boxes with the correct answers.

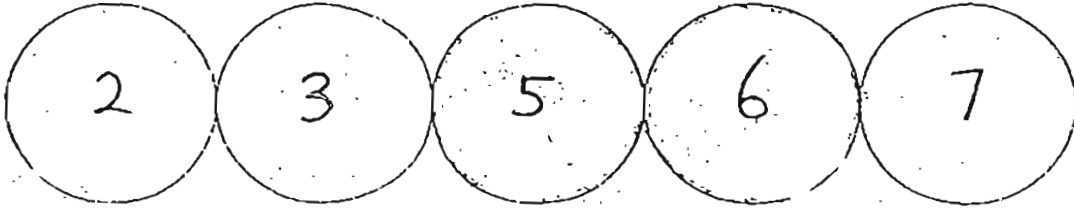
1. Count and write the correct number in the box below.

	
--	--

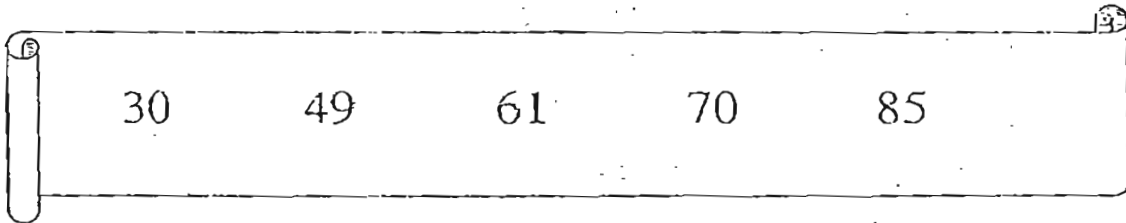
2. Write in words.

43	→	
----	---	--


3. Colour the three numbers which make 11.



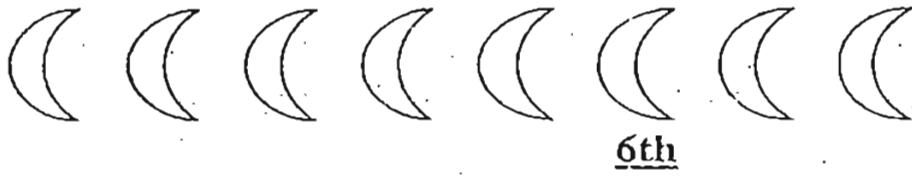
4. Circle the two numbers that are greater than 31 but smaller than 70.



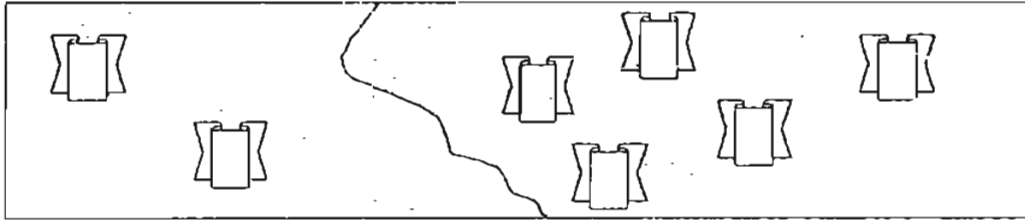
5. Name the shape of this picture.



6. Colour the 3rd moon.



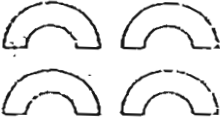

7.



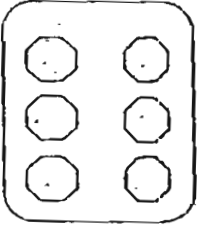
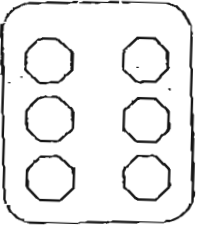
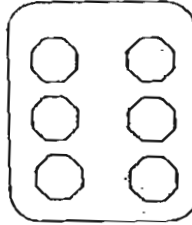
- 5 = 2

8. Tick (✓) the set that has more:

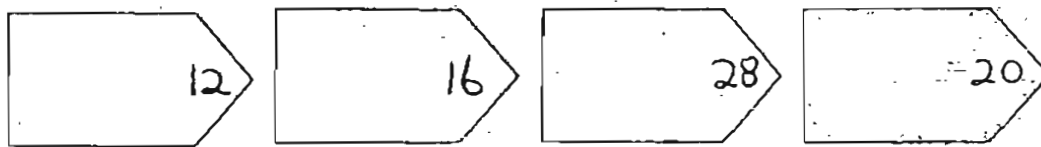
9. Fill in the missing sign (+, - or ×).

		
4	<input style="width: 50px; height: 20px;" type="text"/>	4 = 8

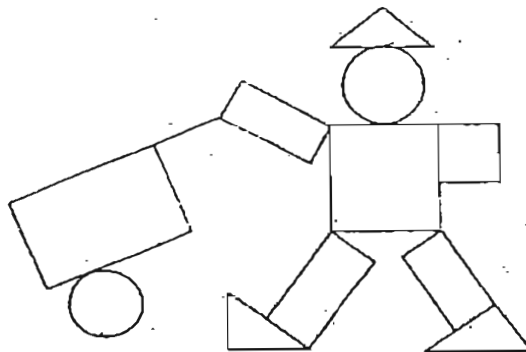
10. Write a multiplication sentence for the picture.

				
<input style="width: 80px; height: 25px;" type="text"/>	×	<input style="width: 80px; height: 25px;" type="text"/>	=	<input style="width: 80px; height: 25px;" type="text"/>

11. Colour the answer that is less than $7 + 8$.



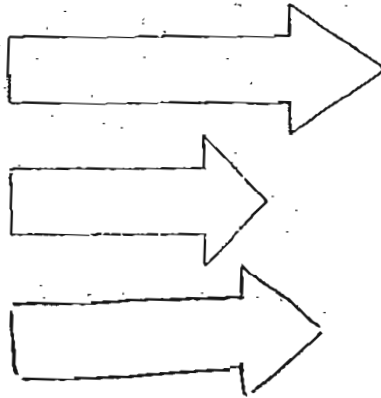
12. Look at the picture carefully.



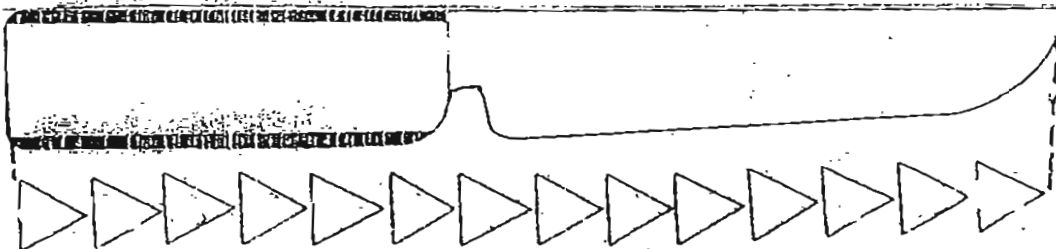
There are circles and triangles.

13. Ring the longest arrow.

Colour the shortest arrow.




14. Look at the picture below.



The knife is about  long.

15. Look at the picture below.



The parcel weighs marbles.

Look at the picture below.
Fill in the blanks for question 16.



16. The is lighter than the .

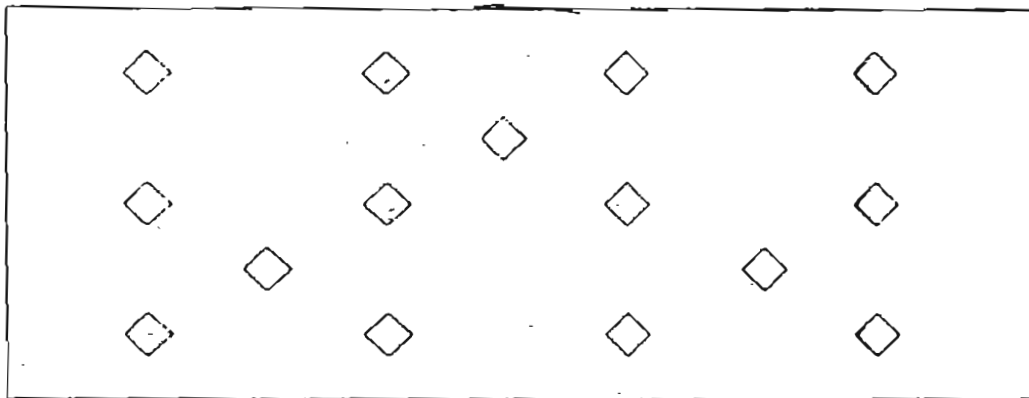
17. Fill in the blank.

$$56 - 21 = \textcircled{?}$$

The answer is

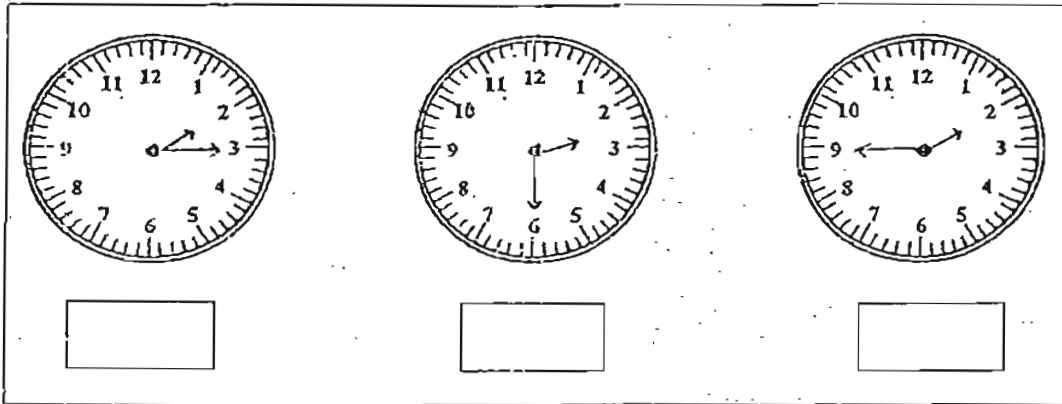
Section B: (2 marks each)

18. Ring the  into groups of 5.



There are groups of 5.

19. Tick (✓) the clock which shows half-past 2.

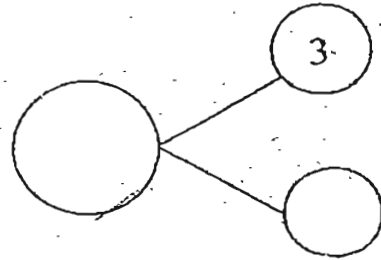
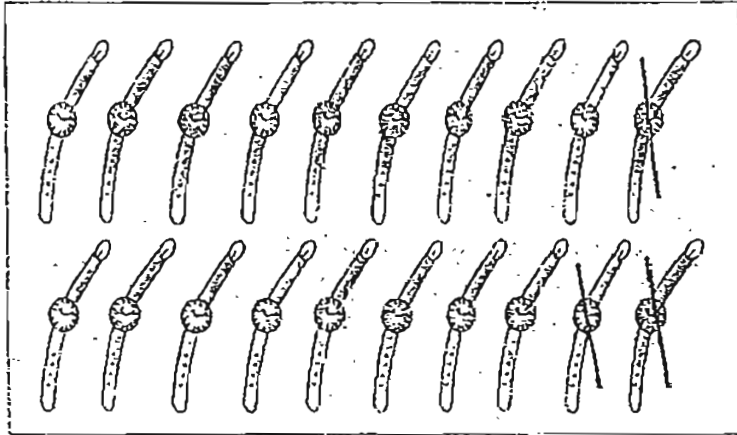


20. Sam needs \$2.50 to buy a pen.
Colour () out the correct amount.

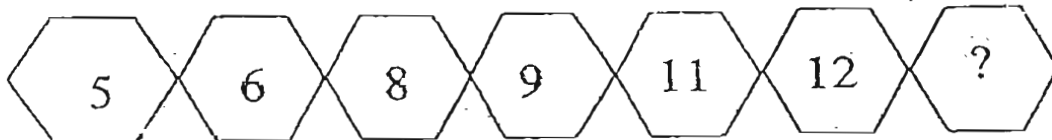


21. 2 fifty-cent coins = ten-cent coins

22. Fill in the blanks.



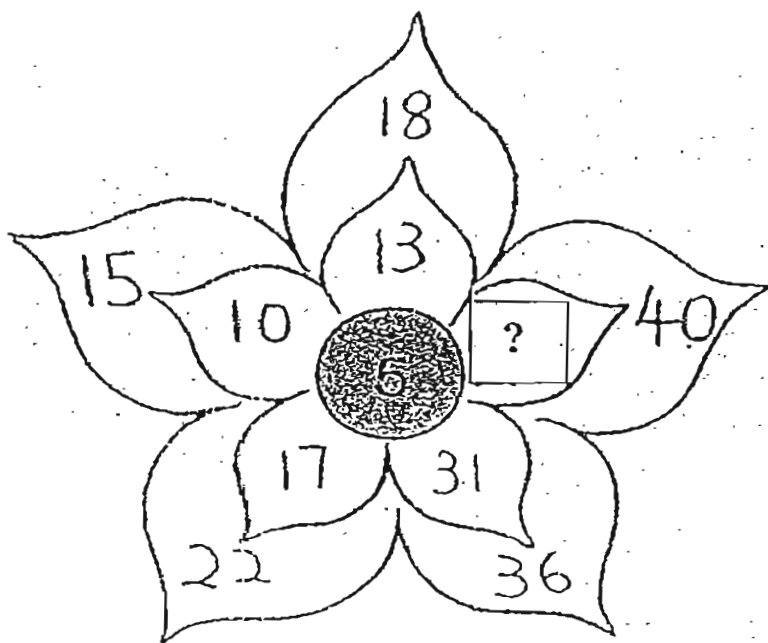
23.



Look at the number pattern above.

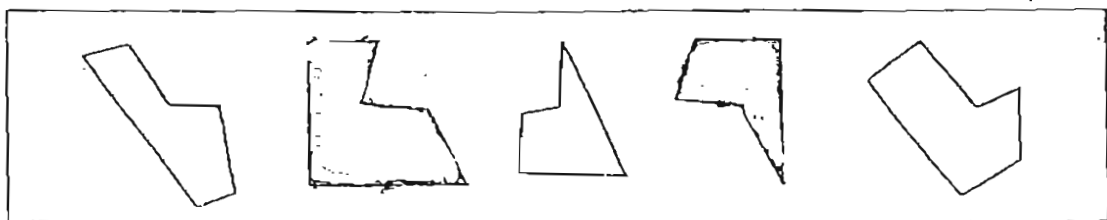
The answer is

24. Fill in the missing number.



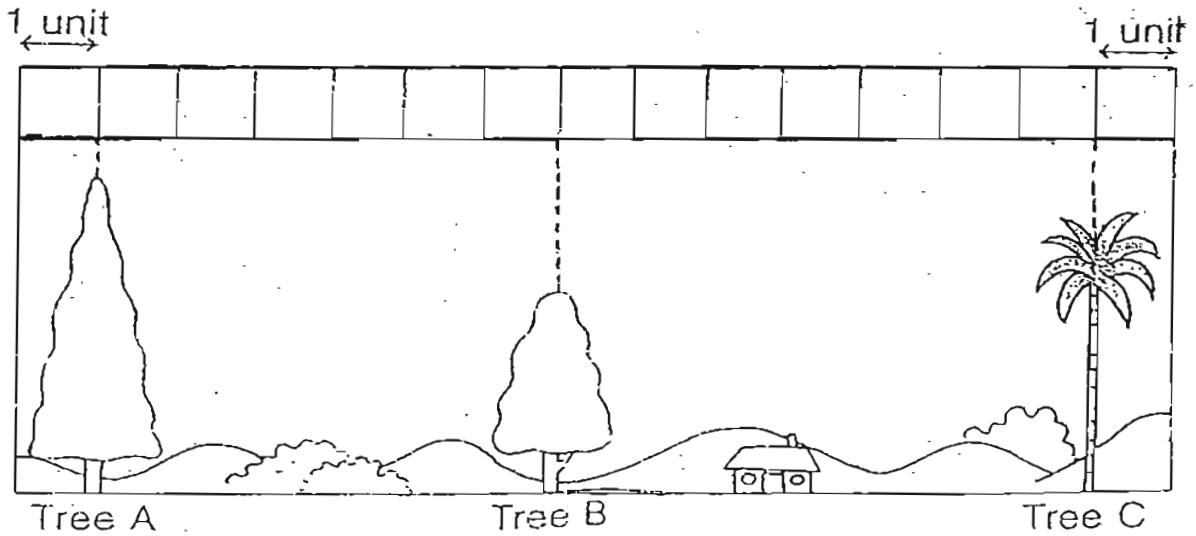
The number is _____.

25. Colour the 2 pieces that will form a square



Section C: (2 marks each)

Look at the picture. Then fill in the blanks.








26. Tree A is units away from Tree C.

27. Tree B is closer to Tree than Tree

Section D: 2 marks each

The picture graph below shows how the pupils of Pr. 4K go to school on Monday. Study the table and answer questions 28 – 32.

How 4K Pupils Travel To School

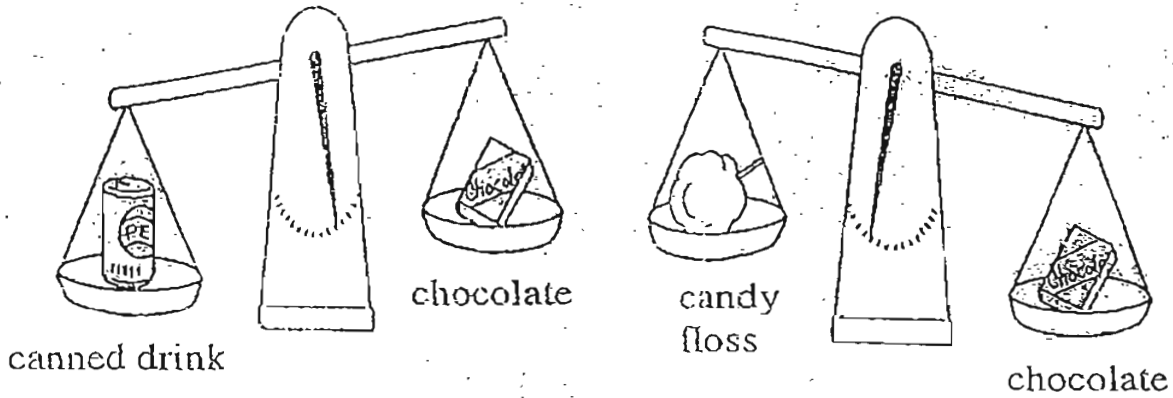
On Foot	
By Cars	
By MRT Trains	
By Bus	
By Scooter	

Each  stands for 1 pupil.

28. pupils go to school by MRT Train.
29. pupils go to school by scooter.
30. more pupils go to school by car than on foot.
31. There are pupils in Pr. 4K altogether.
32. If 2 pupils missed the bus and did not go to school, how many pupils were in school on that day?
 pupils

Section E: 2 marks each

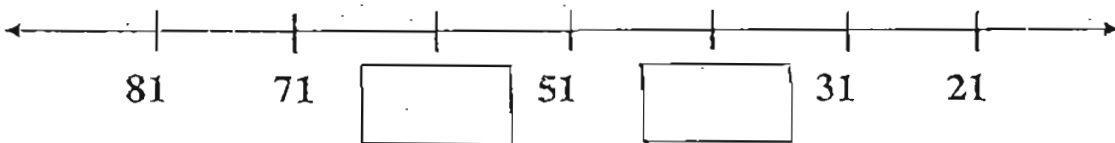
Study the pictures carefully. Then fill in the blanks with the correct answers.



33. The is the lightest.

34. The is the heaviest.

35. Complete the number line below.



36. What time is it?



Section F: 2 marks each

Look at the numbers in the table. Fill in the boxes with the correct numbers.

41	42	43	44	45	46	47	48	49	50
51	52	53	54	55	56	57	58	59	60
61	62	63	64	65	66	67	68	69	70
71	72	73	74	75	76	77	78	79	80
81	82	83	84	85	86	87	88	89	90


37. 72 comes just before

38. is between 42 and 44.


39. 4 tens 11 ones = ones

40. is 5 less than 85.

Section G: 2 marks each


41. Draw  to show 3 groups of 2.

Then fill in the blank.



3 groups of 2 =

42. Divide 10 fish equally into 2 groups.



There are fish in each group.

Section H: 4 marks each

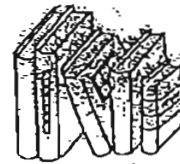
Do these sums carefully. Show your workings clearly.

43. Shannon has 35 marbles. She has 6 marbles less than Dillon.
How many marbles does Dillon have?

$$\square \ominus \square = \square$$

Dillon has _____


44. There are 4 bookshelves.
Each bookshelf has 5 books.
How many books are there altogether?



$$\square \times \square = \square$$

There are _____

45. Tracy buys 14 apples. She uses 2 apples to make an apple pie. Ring the apples to show the number of pies she can make.



She can make _____.

46. Anthony wants to buy a notebook and a pencil. How much money must he pay?



70 cents



25 cents


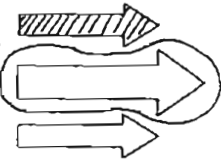
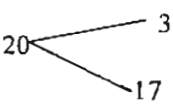
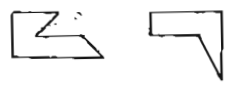
$$\square \bigcirc \square = \square$$

He must pay _____.

END-OF-PAPER
Check your work
carefully!

Nan Hua Primary School
Primary 1 Maths SA2 Exam (2005)

Answer Sheets

- | | |
|--|--|
| <p>1. 8</p> <p>2. Forty-eight</p> <p>3. 2, 4, 5</p> <p>4. 49, 61</p> <p>5. Rectangle</p> <p>6. </p> <p>7. 7</p> <p>8. A</p> <p>9. +</p> <p>10. $3 \times 6 = 18$</p> <p>11. 12</p> <p>12. 2 and 3</p> <p>13. </p> <p>14. 14</p> <p>15. 6</p> <p>16. teddy bear, hen</p> <p>17. 35</p> <p>18. 3</p> <p>19. B</p> <p>20. 10, 20, 20, 50, 50, \$1.00</p> <p>21. 10</p> <p>22. </p> <p>23. 14</p> <p>24. 35.</p> | <p>25. </p> <p>26. 13</p> <p>27. A, C</p> <p>28. 4</p> <p>29. 2</p> <p>30. 2</p> <p>31. 23</p> <p>32. 21</p> <p>33. Candy floss</p> <p>34. Canned drink</p> <p>35. 61, 41</p> <p>36. 11 o'clock</p> <p>37. 73</p> <p>38. 43</p> <p>39. 51</p> <p>40. 80</p> <p>41. 6</p> <p>42. 5</p> <p>43. $35 + 6 = 41$
Dillon has 41 marbles</p> <p>44. $4 \times 5 = 20$
There are 20 books altogether</p> <p>45. She can make 7 apples pies.</p> <p>46. $70¢ + 25¢ = 95¢$
He must pay 95cents</p> |
|--|--|