



AI TONG SCHOOL

SEMESTRAL 2004
CONTINUAL ASSESSMENT 2

PRIMARY (1)

MATHEMATICS

DURATION : 1 h 30 min

DATE: 28th October, 2004

INSTRUCTIONS

Do not open the booklet until you are told to do so.
Follow all instructions.
Answer all questions.


Name : _____ ()

Class : Primary _____

Parent's Signature : _____



Date : _____

Marks



Section A (25 x 2 marks)

Count carefully and write the correct number in the box.

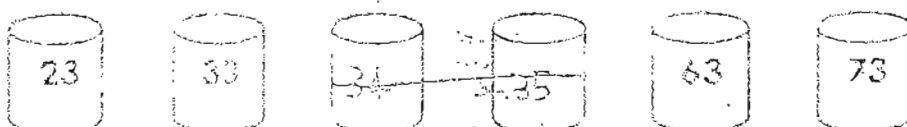
 <input data-bbox="613 594 730 661" type="text"/>	2.  <input data-bbox="1144 594 1261 661" type="text"/>
---	---

Write in words.

3. 94 _____

4. 6 tens 10 ones _____

Fill in the missing numbers.

5. 

6. 

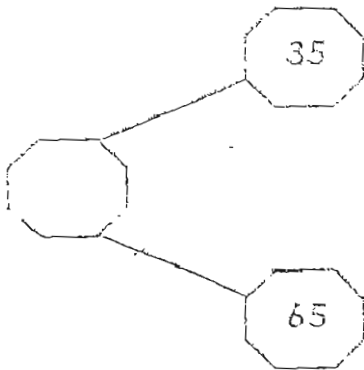
Look at the pictures and answer questions 7 and 8.



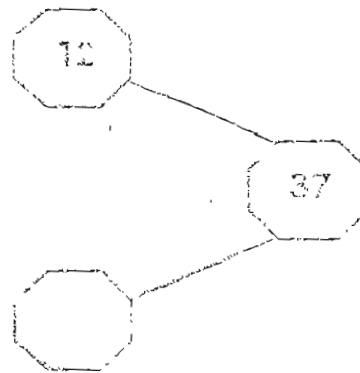
7. Ring the 2nd sheep from the right.

8. Sheep _____ is 4th from the left

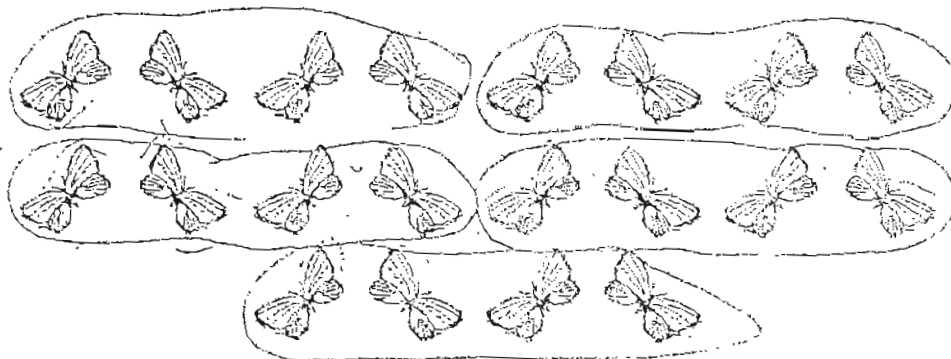
9.




10.



11. Ring the following butterflies into groups of 4.

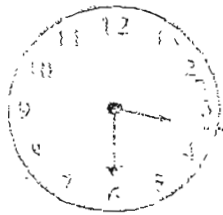


There are _____ groups of 4.



Match the time to the correct clock face.

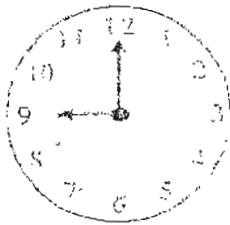
12.



9 o'clock

Half past 4

13.




Half past 3

8 o'clock

Look at the pictures and answer question 14.

Linda's money




Rabbit

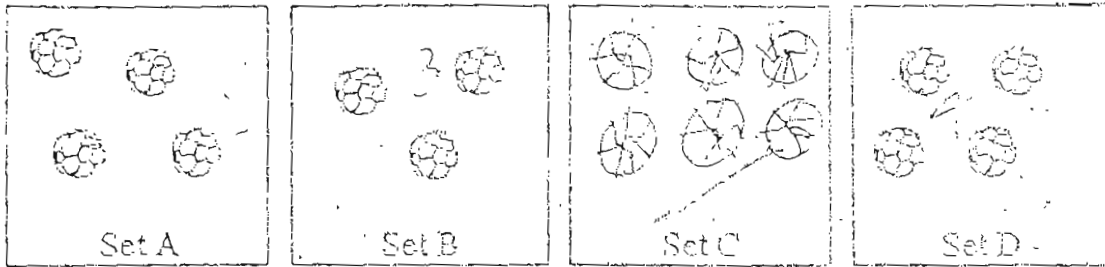




14. Linda has \$_____.


She will have \$_____ left after buying the rabbit.




Look at the pictures and answer questions 15 and 16.

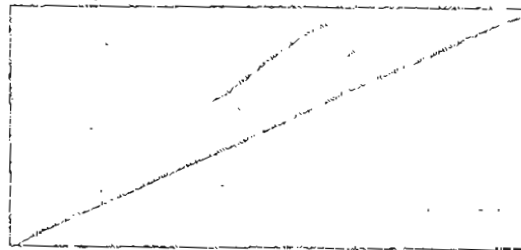


15. Set C has 2 more  than Set A. Draw the number of  in Set C.

Set C has _____ .

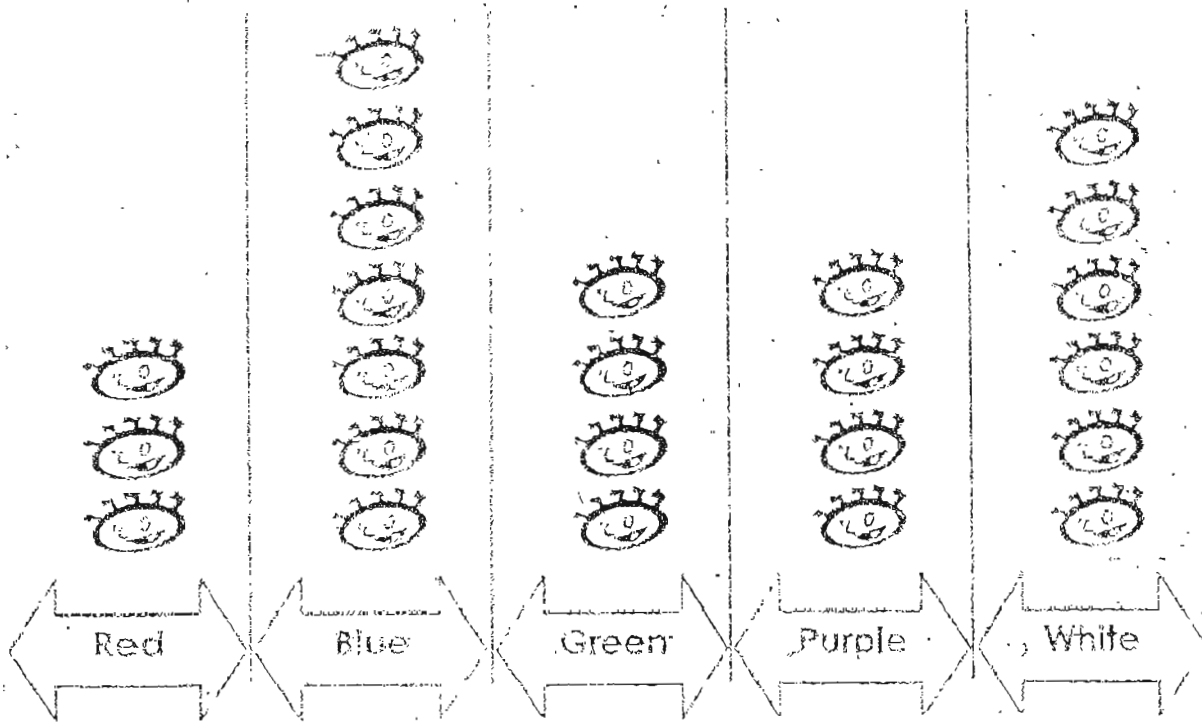
16. Set _____ and Set _____ have the same number of .


17. Draw a line on the rectangle to make 2 triangles.



Study the graph carefully and answer questions 18 and 19.

Our Favourite Colour



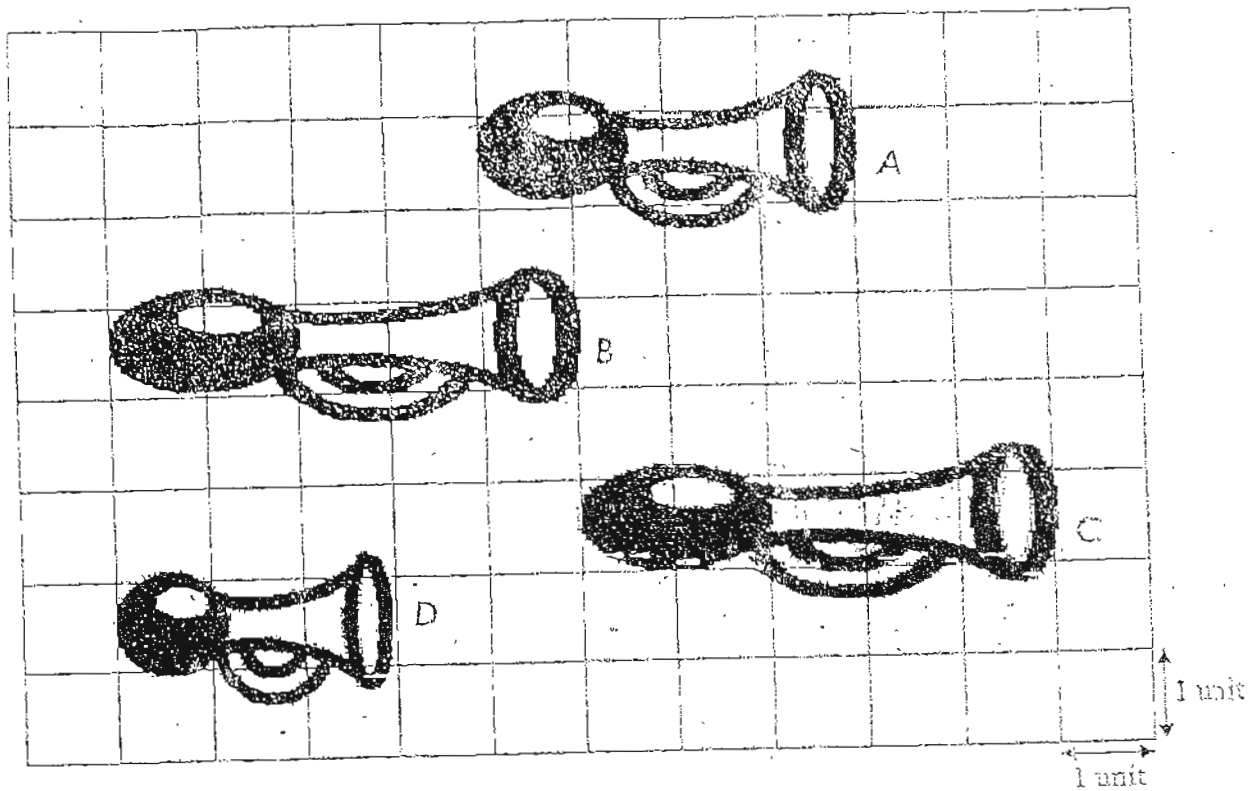
Each  stands for 1 child.

18. 1 more child like green than _____

19. The most popular colour is _____



Look at the following and answer questions 20 and 21.

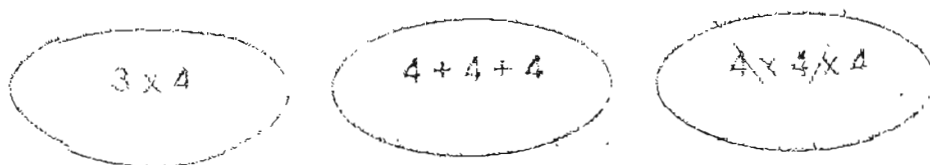


20. Horn B is _____ units long.


21. Horn _____ is the shortest.




23. Cross the set that has a different answer.



Look at the pictures and answer questions 23 and 24.

Use  as 1 unit.



23. The mass of the pineapple is _____ units.


24. The apples are _____ the pineapple.
(lighter than, heavier than, as heavy as)


25. Complete the multiplication sentence.



_____ x _____ = _____


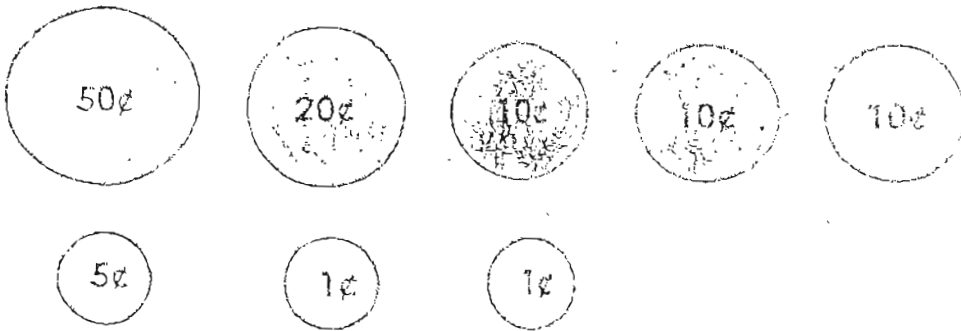


26. Draw  to show 4 fives.

27. Place 9  equally onto the 3 blouses.



28. Colour 4 coins to make 41¢.



Section B (13 x 2)

Do these sums carefully.

29. _____ tens 10 ones = 60

30. $3 \times 4 =$ _____ + _____

31. 5 groups of 3 = _____

32. $6 \times 2 =$ _____

33. 2 twenty-cent coins and 3 five-cent coins = _____ c

34. 8 more than 5 tens 5 ones = _____

35. 9 less than 100 = _____

36. $36 + 43 =$ _____


37. $72 - 8 =$ _____

38. $41 +$ _____ = _____

39. $48 - 22 =$ _____

40. $34 + 50 +$ _____ = 88

41. $13 + 6 + 2 =$ _____



Section C (6 x 3 marks)

42. Bala has 36 stickers.
He has 8 more stickers than Ali.
How many stickers does Ali have?

Ali has _____ stickers

43. There are 9 red beads, 4 green beads and 7 blue beads in a box.
How many beads are there in the box?

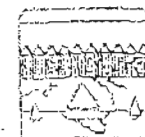
There are _____ beads in the box.




44. There were 48 children in a bus.
16 of them were girls.
The rest were boys.
How many boys were there in the bus?

There were _____ boys in the bus.


45. Meiling has 3 boxes of colour pencils.
There are 10 colour pencils in each box.
How many colour pencils does Meiling have ?



Meiling has _____ colour pencils.

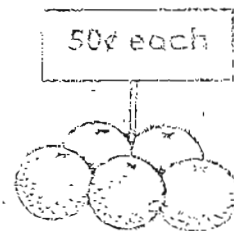


46. Mrs Li has 24 eggs.
 She puts them equally in 4 trays.
 How many eggs are there in each tray?
Draw the correct number of eggs in each tray.



There are _____ eggs in each tray.

47. Mr Ton had \$ 10.
 He bought 4 oranges.
 How much money had he left?



\$3




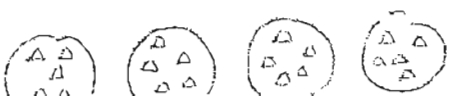
He had \$ _____ left.

- End of paper -
 Check your work carefully.



SA AI TONG SCHOOL
 CONTINUAL ASSESSMENT 2 - 2004
 PRIMARY 1 MATHEMATICS

SAW

- 1) 28
- 2) 19
- 3) ninety-four
- 4) seventy
- 5) 43 53
- 6) 68 72
- 7) ○ ○ ○ ● ○
- 8) 8
- 9) 100
- 10) 25
- 11) Ring 4 butterflies
- 12) Half past 3
- 13) 9 o' clock
- 14) 30
- 15) 6
- 16) A and D
- 17) 
- 18) Red
- 19) Blue
- 20) 5
- 21) D
- 22) 4 x 4 x 4
- 23) 5
- 24) lighter than
- 25) 3 x 4 = 12
- 26) 
- 27) Draw 3 hearts in each blouse.
- 28) 20¢ 10¢ 10¢ 1¢
- 29) 5
- 30) 4 4 4
- 31) 15
- 32) 12
- 33) 55
- 34) 73
- 35) 91
- 36) 79
- 37) 64
- 38) 40
- 39) 26
- 40) 4
- 41) 21
- 42) 28
- 43) 30
- 44) 32
- 45) 30
- 46) Draw 6 eggs in each rectangular box.
- 47) \$ 8