


ST ANTHONY'S PRIMARY SCHOOL



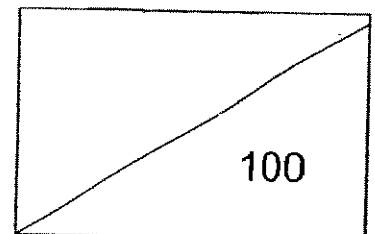
FIRST SEMESTRAL EXAMINATION 2007 MATHEMATICS PRIMARY 1

Name	()	Class	Pr 1 ()
Parent's Signature		Date	

46 questions

100 marks

Total Time : 1 hour 30 minutes



DO NOT OPEN THE BOOKLET UNTIL YOU ARE TOLD TO DO SO.
FOLLOW ALL INSTRUCTIONS CAREFULLY.
ANSWER ALL THE QUESTIONS.

Section A (2 marks each)

Read the instructions before you do the sums.

1. Write the correct **number** in the boxes.

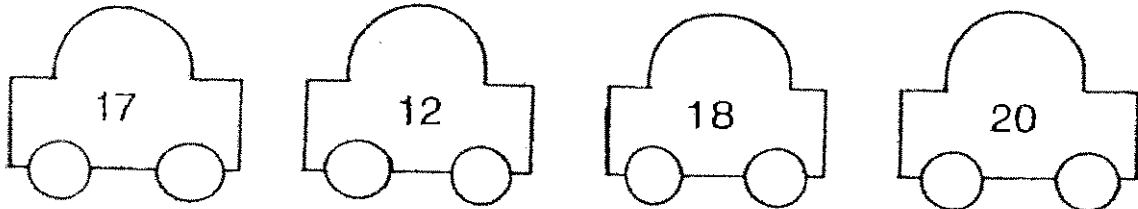
(a)

four	
------	--

(b)

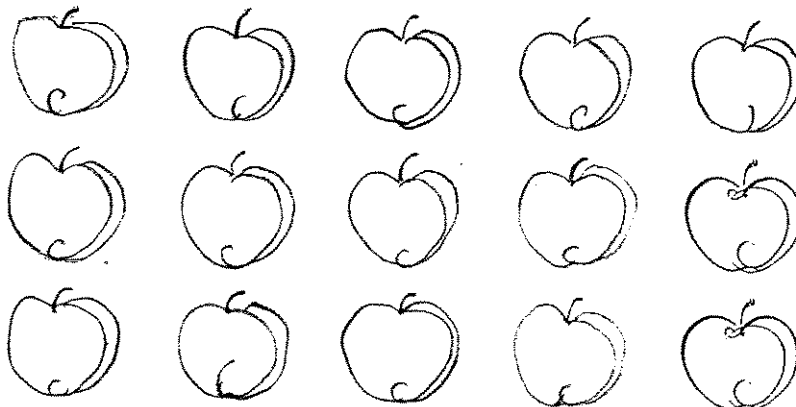
eight	
-------	--


2. **Circle** the toy car with the **smallest** number.



3. **Colour** the correct number of apples.

13






Write the correct answer in the box.

Star is second from the right.

5. **Circle** the number between 13 and 15.

9	11	14	10
---	----	----	----

6. **Circle** the 3rd lollipop from the left.



7. $19 - 6 =$

8. $15 - \boxed{} = 7$

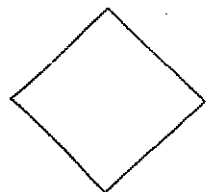
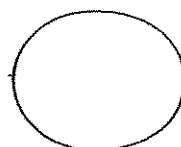
9. Which of the following two numbers make 19 ?

12	5	11	15	8
----	---	----	----	---

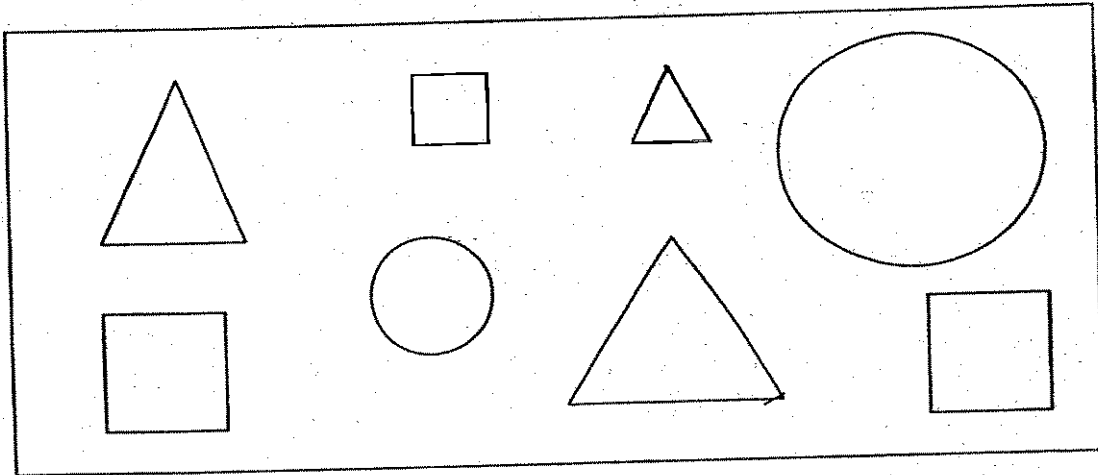
and make 19.

10. $12 + \boxed{} = 20$

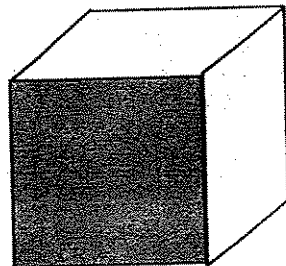
11. Cross out (X) the rectangle.



12. **Colour** the **smallest** triangle.





13. **Name** the **shape** of the shaded face and write your answer in the given box.

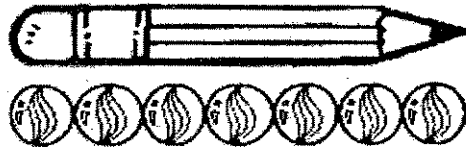


It is a

14. **Colour** the **shortest** ruler.



15. Look at the picture. Then write the correct answer in the box.




The pencil is about



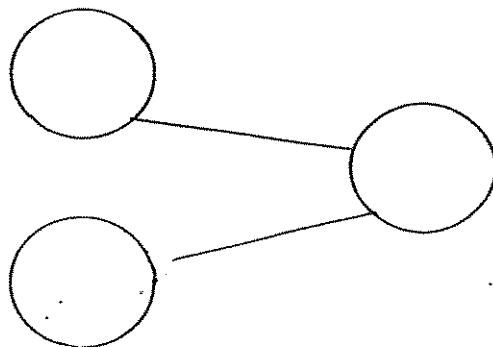
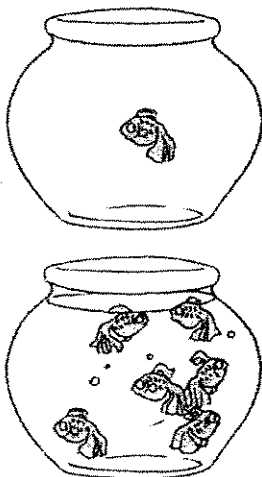
long.

16. (a) Cross out (X) 3 cars.

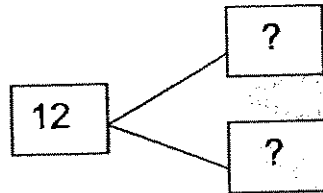


(b) 3 more than 10 is

17. Look at the picture. Then complete the number bond.



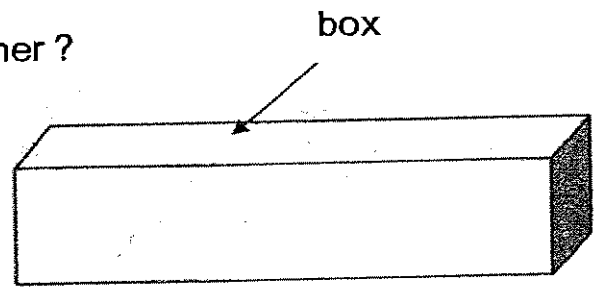

18. The two missing numbers in the boxes are the same.



The number is

19. There are 5 bells in the box.


How many bells are there altogether ?




There are

bells altogether.

20. $10 - 3 = 8 -$

21. Draw a flag () for the second boat from the left.



22. Circle all the numbers that are smaller than 15.


17	12	11	19	16	6	14
----	----	----	----	----	---	----

23. 1 ten and ones = 18

24. Complete the number pattern. Fill in the blank in the box.

15	13		9	7
----	----	--	---	---

25. Colour the 6th flower.



2nd

26. is 9 less than 20.

27. What number is 2 more than $10 + 6$?

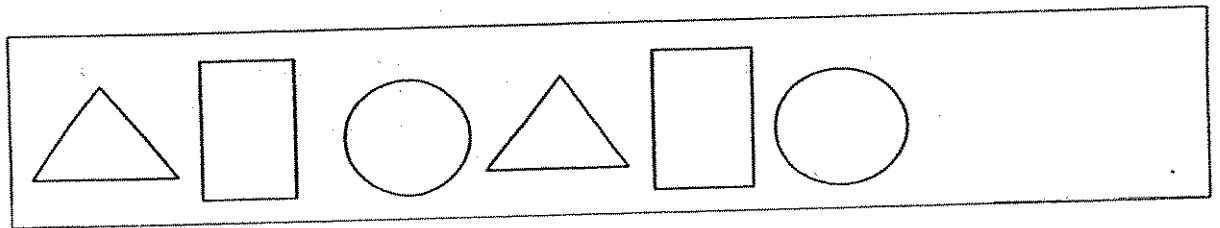
Write the number in the box.

The number is

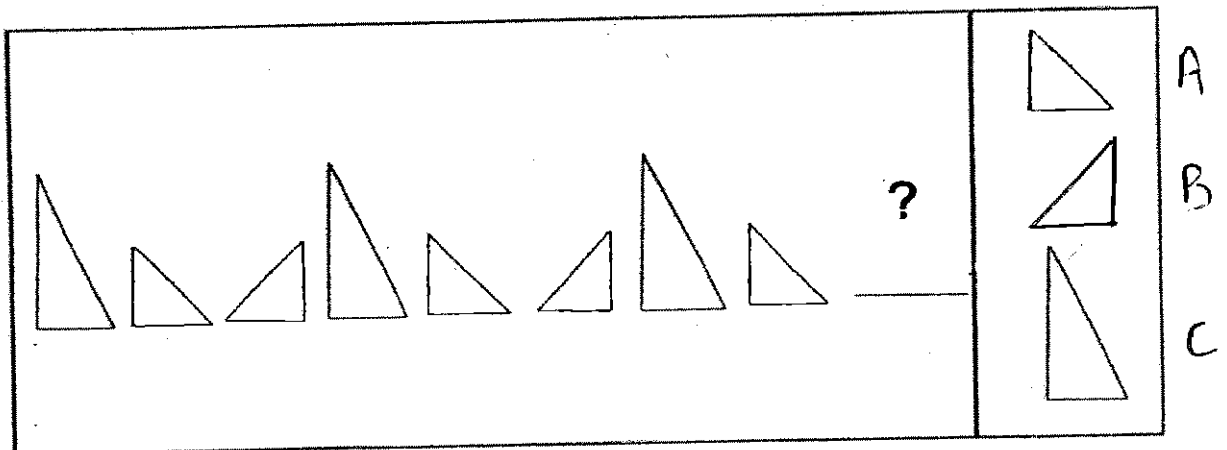
28. Write + or - in the boxes.

15 3 \neq 7 5


29. Complete the pattern below by drawing the correct shape in the space given.



30. What comes next ? Colour it .



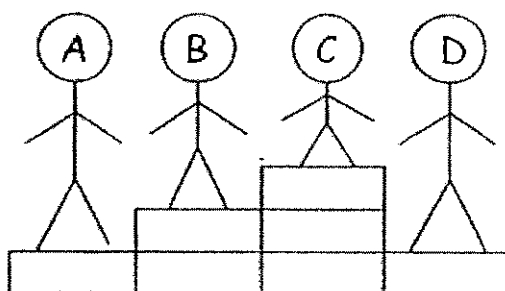
Look at the picture below for Questions 31 and 32.



31. The figure above is made up of circles and triangles.

32. There are fewer circles than triangles.

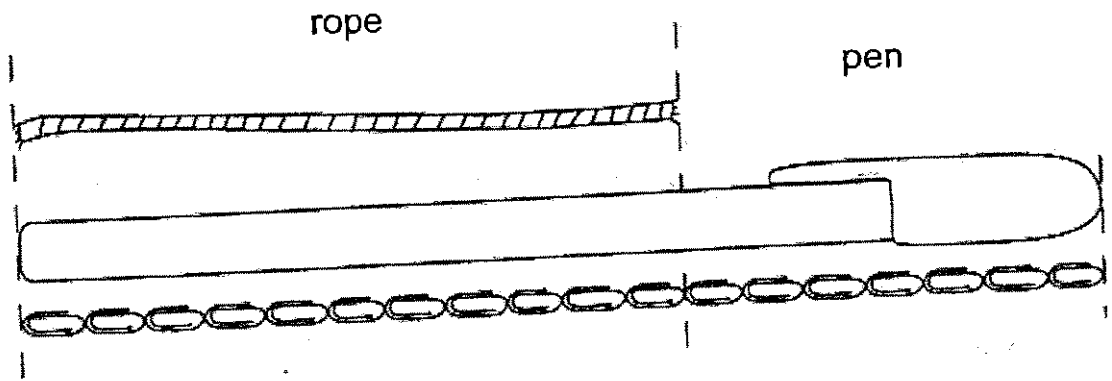
Look at the picture below to answer questions 33 and 34.




33. is as tall as D.

34. is shorter than B.


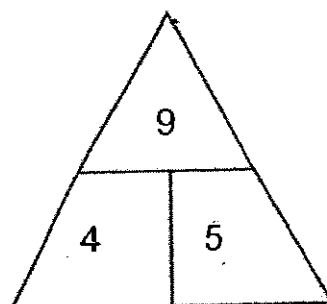
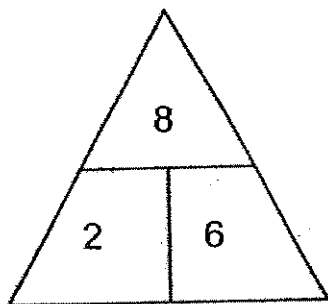
35. Look at the figure below and answer the question.



The rope is shorter than the pen by 

36. Study the pattern below.

The missing number is



37. * + ✨ = 9

* - ✨ = 1


Then * =

38. A storybook has 10 pages.

Aishah has just finished reading 2 pages.

She is now reading the page.

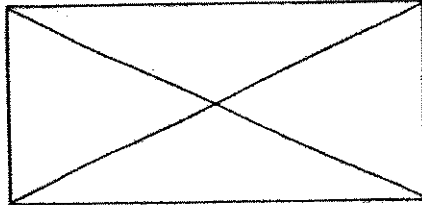
39. Write an **addition** and **subtraction sentence** for the picture below.



+ =

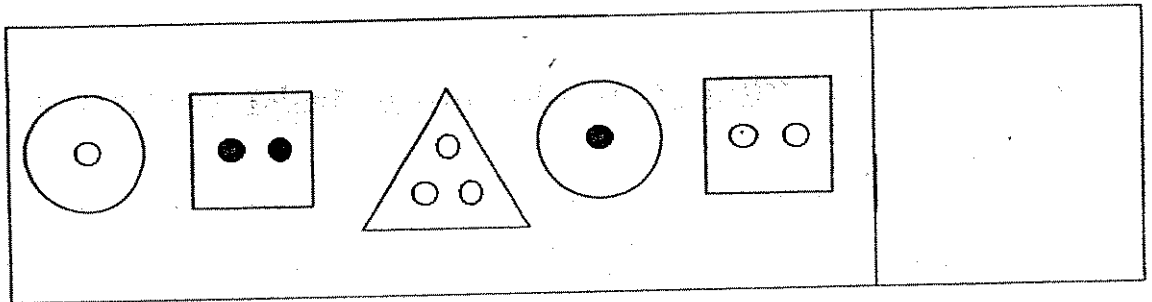
- =

40. Look at the picture below.



There are triangles.

41. Study the pattern below. What comes next? Draw it.



42. Mrs. Leong has 3 children. Jane, Ken and Sally.
Ken is taller than Jane but shorter than Sally.

Who is the tallest?

is the tallest.

Section B (4 marks each)

Do these story sums carefully .

Please show all your working.

43. Jean has 3 apples.

Siti has 4 apples more than Jean.

How many apples does Siti have ?

$$\boxed{} \bigcirc \boxed{} = \boxed{}$$

Siti has _____ apples.

44. Aileen has 20 cookies.

Devi has 3 cookies fewer than Aileen.

How many cookies does Devi have ?

$$\boxed{} \bigcirc \boxed{} = \boxed{}$$

Devi has _____ cookies.

45. Five girls are queuing for popcorn. Jenny is the first girl in the queue. Shamala is behind her. Aishah is fourth in the queue. Mimi is before Aishah. Lisa is after Aishah.

Fill in the names of the girls in the boxes.



Jenny







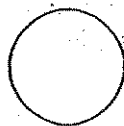


46. Mother bought 20 eggs.

She used some eggs to bake a cake.

She then had 8 eggs left.

How many eggs did she use ?



=

She used _____ eggs.

☺ Please check your answers. ☺

