

Nanyang Primary School
Mathematics
Primary 1
Term 3 Combined Topical Test

Name _____

Marks: / 40

Class: Primary 1 ()

Date: 25 August 2014

Duration: 45 minutes

Section A

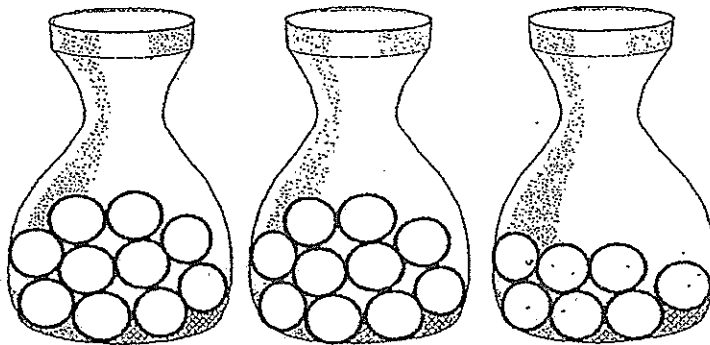
Questions 1 to 10 carry 1 mark each.

For each question, four options are given.

One of them is the correct answer.

Choose the correct answer and write its number (1, 2, 3 or 4) in the brackets () provided. (Total: 10 marks)

1. Look at the three jars below.



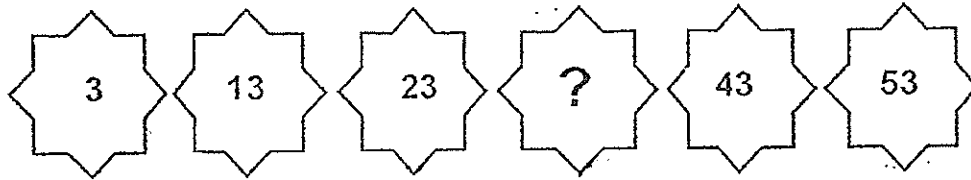
How many marbles are there in the jars altogether?

- (1) 25
(3) 27

- (2) 26
(4) 30

()

2. Complete the number pattern below.




- (1) 24
- (2) 32
- (3) 33
- (4) 42
- ()

3. 50 is _____ 3 tens 8 ones.

- (1) smaller than
- (2) equals to
- (3) greater than
- (4) the same as
- ()


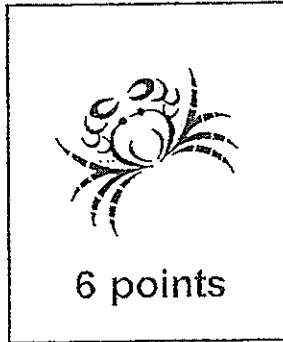
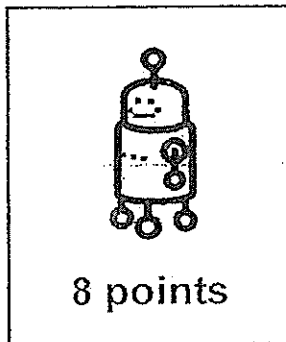
4. Look at the equation below.



What is the missing number?

- (1) 21
- (2) 41
- (3) 65
- (4) 75
- ()

5. Wendy has 3 picture cards as shown below.



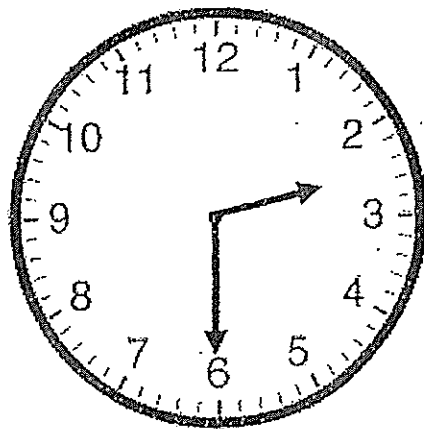
What are the total points on all the cards?

- (1) 9
(3) 14

- (2) 11
(4) 17

()

6. Annie read a book at the time shown on the clock face below.



What time did she read the book?

- (1) Half past 2
(3) 2 o'clock

- (2) Half past 3
(4) 6 o'clock

()

7. I am a number greater than $15 + 28$ but smaller than $25 + 20$.
What number am I?

(1) 43 (2) 44
(3) 45 (4) 46 ()

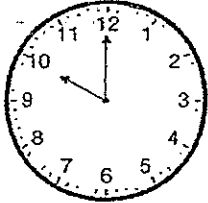



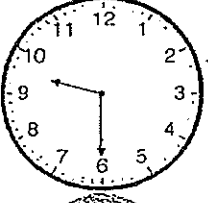

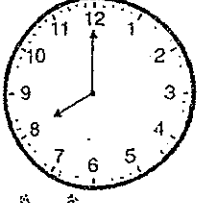

8. Mrs Tan had 86 apples.
She gave some apples away.
Then she had 29 apples left.
How many apples did she give away?

(1) 53 (2) 57
(3) 58 (4) 63 ()

9. John had some stamps.
After Eric gave John 7 stamps, John had 62 stamps in the
end.
How many stamps did John have at first?

(1) 55 (2) 65
(3) 69 (4) 76 ()

10. The following diagrams show Lucy's morning in school.

  English	  Assembly
  Maths	  Art

Arrange the activities to show the correct order.

	1 st	2 nd	3 rd	4 th
(1)	Assembly	Maths	Art	English
(2)	Assembly	English	Maths	Art
(3)	Assembly	Art	Maths	English
(4)	Assembly	Art	English	Maths

()

Section B

Questions 11 to 19 carry 2 marks each.

Show your working clearly in the space provided for each question and write your answer in the blank provided.

(Total: 18 marks)

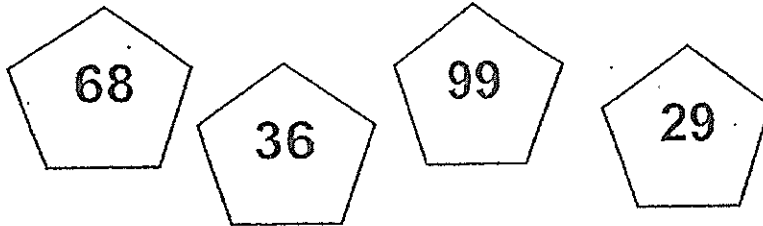
11. (a) Write 4 tens 2 ones in numerals.

(b) Write thirty-seven in numerals.

12. Find the sum of 10 and 35.

Ans: _____

13. Arrange the numbers from the greatest to the smallest.



14. Kayla has 61 stickers.
May has 26 more stickers than Kayla.
How many stickers does May have?

Ans: _____

15.



Using the digits shown above, Angeline decided to form the smallest two-digit number, using each digit only once.
What number did she form?

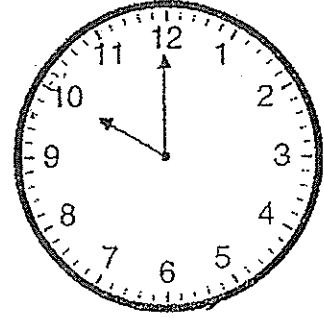
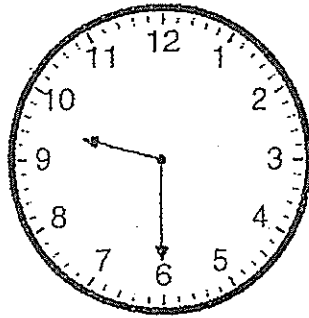
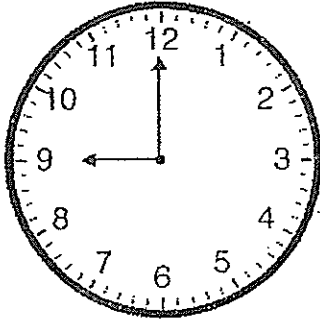
Ans: _____

16. What is the missing number in the pattern below?

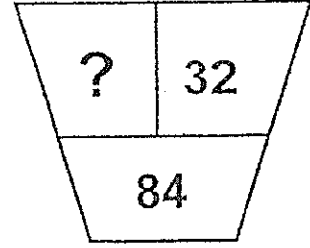
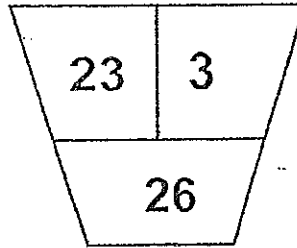
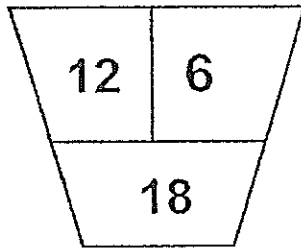


Ans: _____

17. Tom and Jerry played basketball at 9 o'clock.
They played basketball for one hour.
At what time did they stop playing basketball?
Circle the clock that shows the correct time.



18. What is the missing number?



Ans: _____

19. Peter is taller than Janet.
Janet is shorter than Tammy but taller than Ken.
Who is the shortest?

Ans: _____

Section C


Questions 20 to 22 carry 4 marks each.

Do these word problems carefully.

Show your working clearly in the space provided for each question.


(Total: 12 marks)

20. Tom collected 26 seashells from the beach.
Kimberly collected 19 more seashells than Tom.
How many seashells did Kimberly collect?




Kimberly collected _____ seashells.

21. Si Ming and Michelle have 97 stamps altogether.
Michelle has 28 stamps.
How many stamps does Si Ming have?




Si Ming has _____ stamps.

22. The diagram below shows the number of erasers some children collected.
Gina collected the most erasers.
Harry collected the fewest erasers.



Fill in the blanks.

- a) Gina collected _____ erasers.
b) Harry collected _____ erasers.
c) How many more erasers did Gina collect than Harry?



Gina collected _____ more erasers than Harry.

☺ *End of Paper* ☺
Please Check Carefully

YEAR: 2014

LEVEL: P1

SCHOOL: NANYANG

SUBJECT: MATHEMATICS

SEMESTER: TERM 3

Q1	Q2	Q3	Q4	Q5	Q6	Q7	Q8	Q9	Q10
3	3	3	4	4	1	2	2	1	3

11. a) 42

b) 37

12. 45

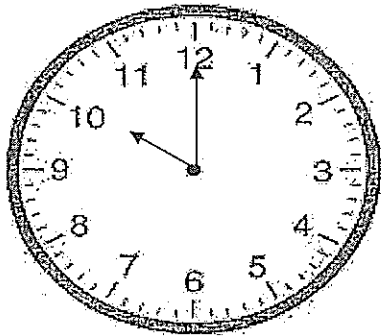
13. 99, 68, 36, 29

14. 87

15. 34

16. 43

17.



18. 52

19. Ken

20. $26 + 19 = 45$

21. $97 - 28 = 69$

22. a) 84

b) 13

c) $84 - 13 = 71$

