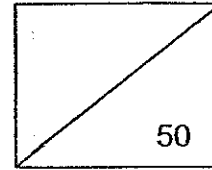




HENRY PARK PRIMARY SCHOOL
2010 MID-YEAR REVIEW
MATHEMATICS
PRIMARY 1



Name: _____ ()

Parent's Signature _____


Class: Pr 1 _____

Duration of Paper: 1 h

Section A : Multiple Choice Questions (2 marks each)

Read the questions carefully. Choose the correct answer and put a tick in the correct box.

1. There are _____ butterflies.




twelve	
thirteen	
fifteen	

2. $12 - 3 =$ _____

8	
9	
15	

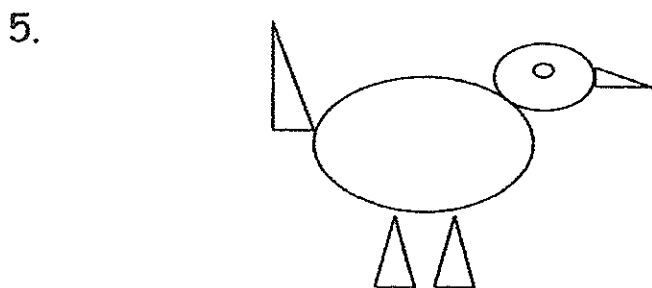
3. Which two numbers when added gives 19?

1 and 9	
9 and 10	
9 and 11	



Maria is _____ from the finishing line.

2nd	
3rd	
4th	



There are _____ triangles.

3	
4	
7	

Section B : Open - Ended Questions (2 marks each)

Fill in your answers in the blanks provided.

6. Write the following number in words.

12	
----	--

7. $8 + 7 =$

8. Read the clues carefully. Write the names of the girls on the lines provided.

Clue 1: Susan is 2nd from the left.


Clue 2: Joyce is the 1st from the right.

Clue 3: Grace is between Susan and Joyce.

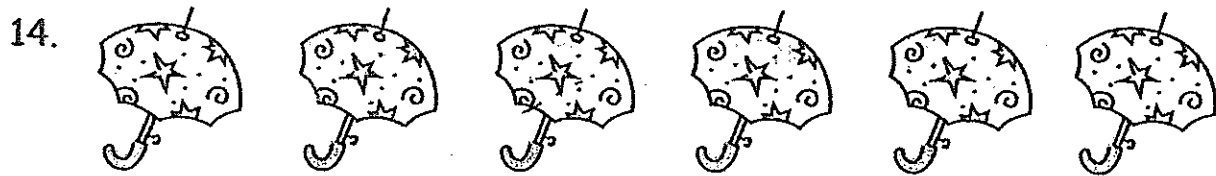
Clue 4: Susan is between Betty and Grace.



9. Ring the 9th lollipop from the right.





13. $8 + \square = 15$



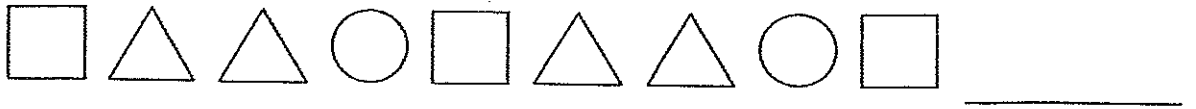
Cross out the 5th umbrella from the right.

15. Name this shape. This is a _____.

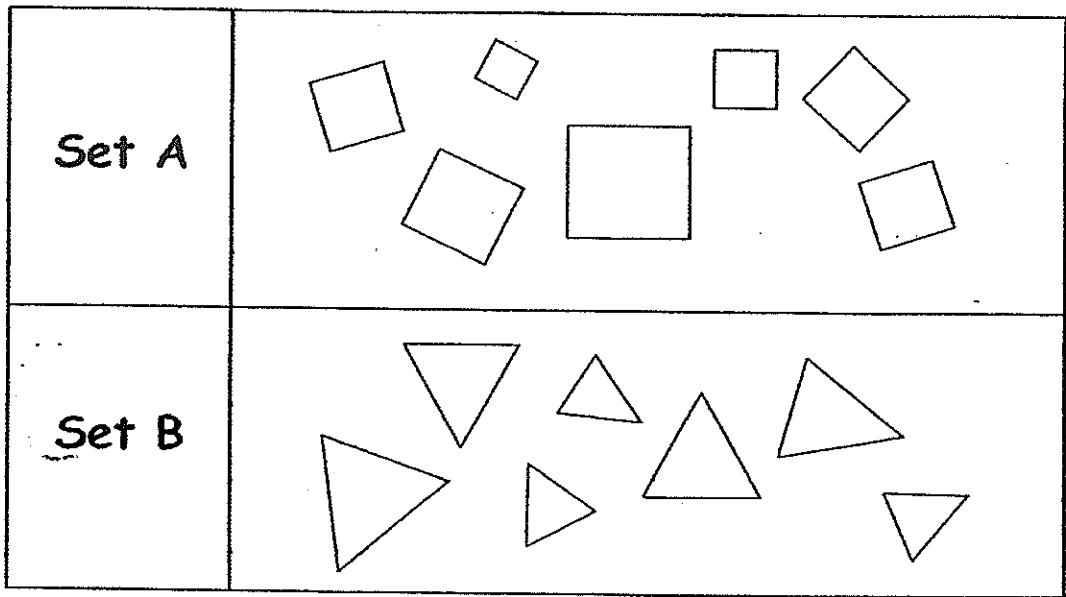


The _____ is last from the right.

17. Complete the pattern.

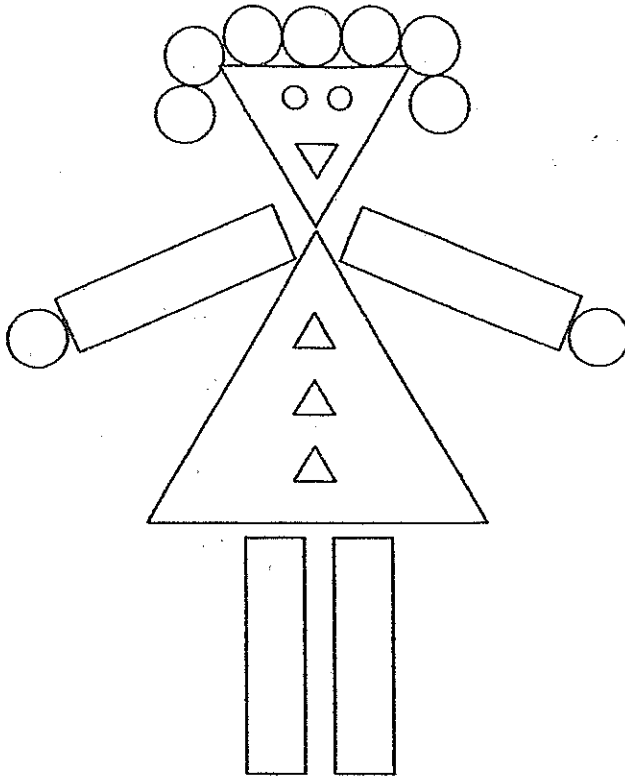


18.



Look at the picture above. The sets above are grouped according to _____ (shape/ size).

19.

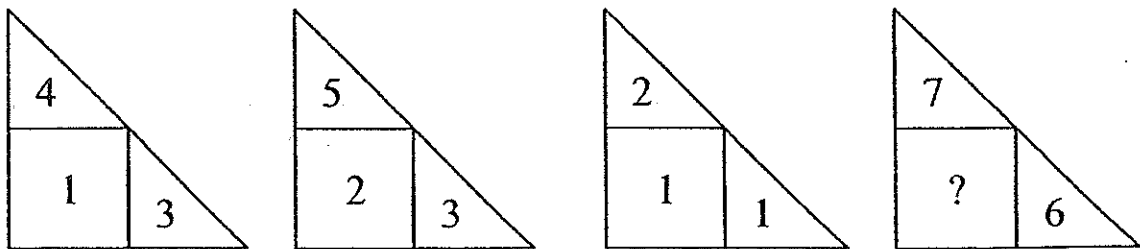


There are _____ more circles than triangles.

20. Complete the number pattern.

19, _____, 15, 13, _____, 9

21.



The missing number is _____.

Section C: Story Sums (4 marks each)

Read each question carefully. Show your workings and number sentences clearly in the spaces provided.

22. Johnny had 18 pencils. He gave his sister 7 pencils. How many ~~marbles~~ had he left?
pencils

Working

He had _____ pencils
marbles left.

23. Benny has 7 sweets. His father gives him 8 more sweets. How many sweets does he have now?

Working

He has _____ sweets now.

-END OF PAPER-



ANSWER SHEET

EXAM PAPER 2010

SCHOOL : HENRY PARK PRIMARY
SUBJECT : PRIMARY 1 MATHEMATICS

TERM : SA1

- 1) fifteen 2) 9 3) 9 and 10 4) 3rd 5) 4
6) twelve 7) 15 8) Betty, Susan, Grace, Joyce 9) x x o x x x x x x x x
10) 2, 5, 12, 18 11) 12 12) $6 + 5 = 11$ 13) 7 14) 0 x 0 0 0 0
15) rectangle 16) elephant 17) Δ 18) shape 19) 5
20) 17, 11 21) 1

22) $18 - 7 = 11$
He had 11 pencils left.

23) $7 + 8 = 15$
He has 15 sweets now.

