



RAFFLES GIRLS' PRIMARY SCHOOL
SEMESTRAL ASSESSMENT (1)

2009


Name: _____ Class: P1 _____ Index No: _____

12 May 2009 MATHEMATICS ATT: 1 h 30 min

Your Score Out of 100 marks		
	Class	Level
Highest score		
Average score		
Parent's Signature		

Section A (38 × 2 marks)

1. Count the number of bananas and write the answer in the box below.



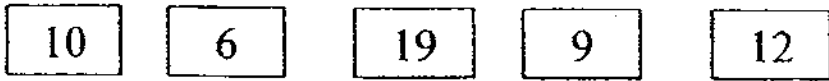
2. Write the number below in words.

18	
----	--

3. Put a tick against the set that has fewer objects.


	A
	B

4. Arrange these numbers in order. Begin with the **smallest** number.

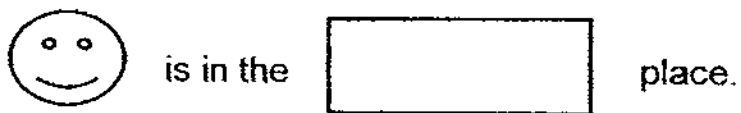


smallest

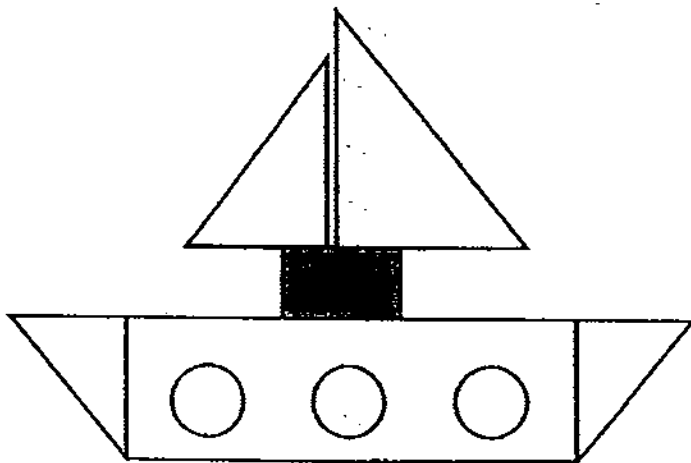
5. Look at the picture below.




first





6. Name the shape that is shaded.



It is a



7. Look at the pictures below.




Circle the correct word in the statement below.


Pencil A is **longer / shorter** than Pencil B but

longer / shorter than Pencil C.

Look at the picture below and answer the questions 8 and 9.



Lynn



Sally

Each  stands for 1 unit.

8. Sally is about  high.

9. is taller.

10. Mummy keeps the following jars in the cupboard.



sausages



cherries



jam




peanut butter

second

The jar of sausages is in the place.

11. Write an **addition** sentence in the box based on the picture given.

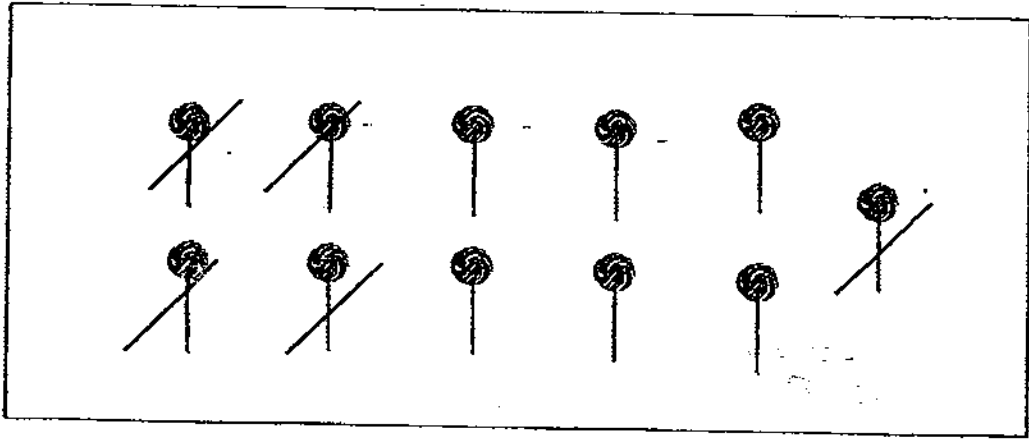


$$\boxed{} \bigcirc \boxed{} = \boxed{}$$

12. 3 more than 10 is

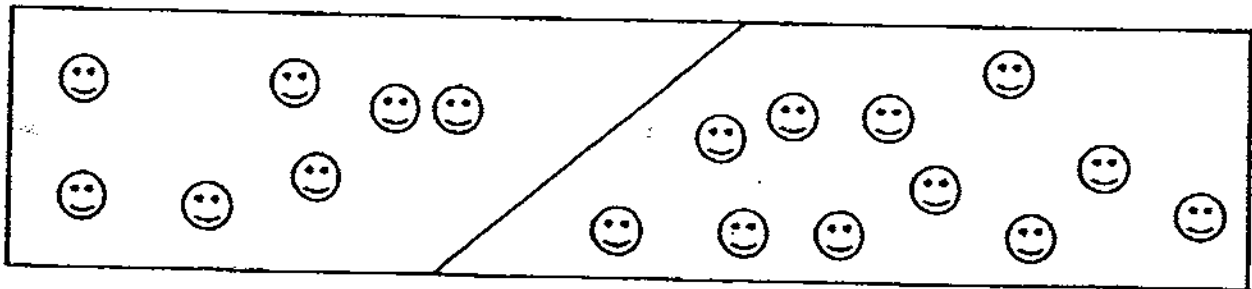
13. 0 and 8 make

14. Write a **subtraction** sentence in the box based on the picture given.



○ =

15. Write an **addition** sentence and a **subtraction** sentence based on the picture given.




+ =
 - =

16. What is 8 more than 9? Write the answer in words in the box below.

--

17. Fill in the blank with "the same as", "more than", or "fewer than".

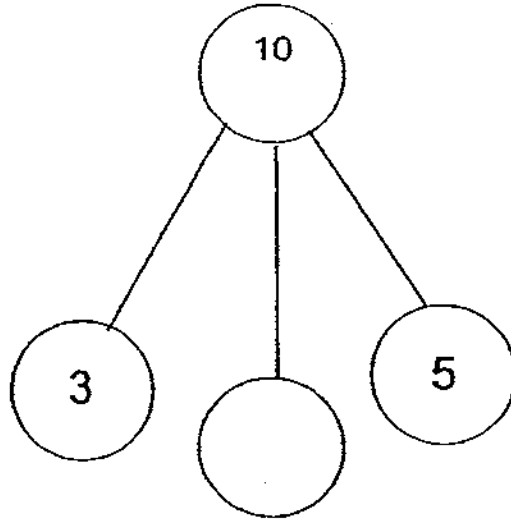


The number of watermelons is _____ the number of pineapples.

18. Write the missing numbers in the boxes to complete the number pattern.

5	8		14	17	
---	---	--	----	----	--

19. Fill in the missing number to complete the number bond.

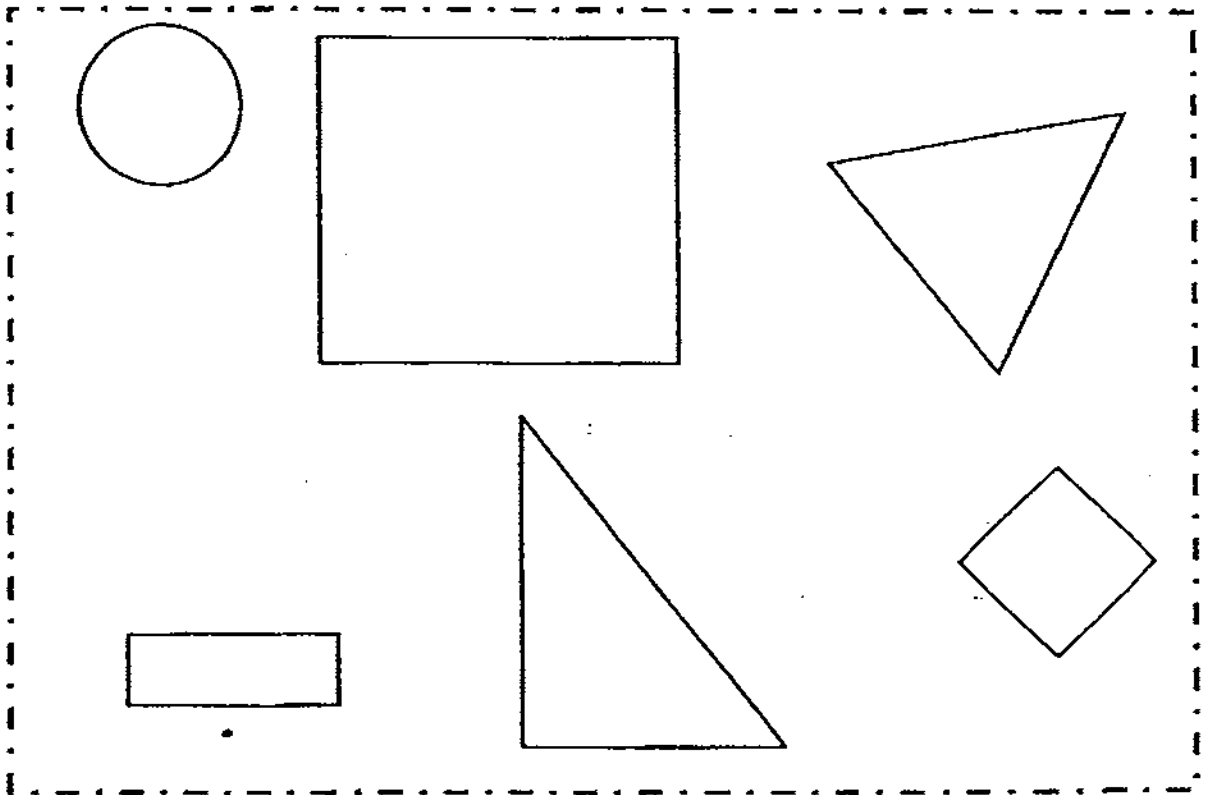



20. Linda is standing in a queue.

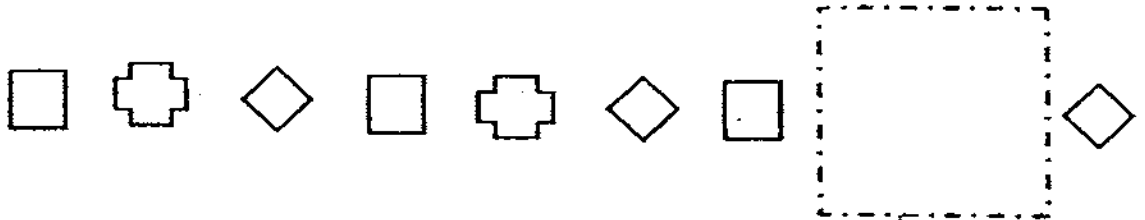
There are 4 people standing in front of her.

What is Linda's position in the line after two of the people in front of her have left?

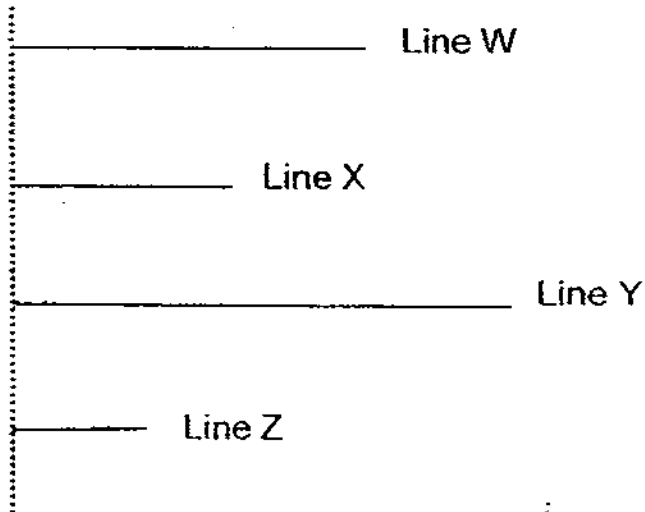
21. Colour the 3 shapes that form the picture below.



22. Look at the picture below. Complete the pattern.

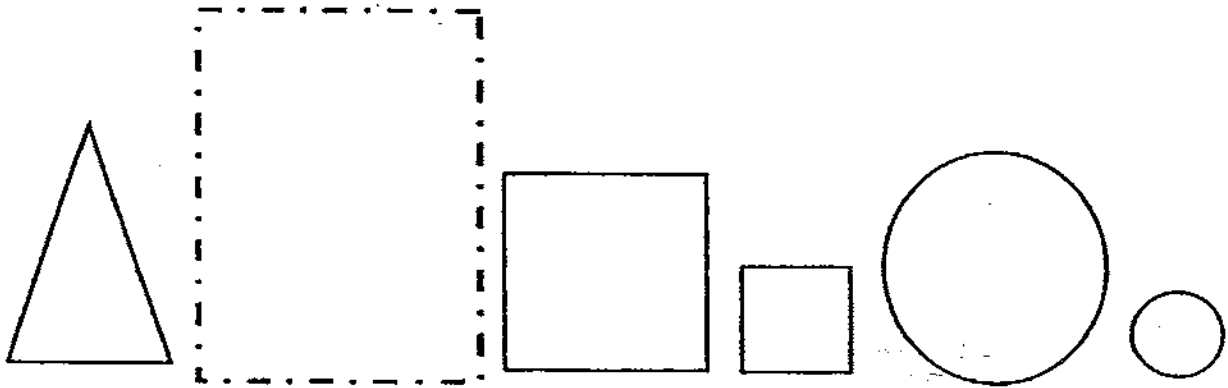


23. Arrange the lines in order.
Begin with the **shortest** line.




shortest

24. Look at the picture below.
Complete the pattern.



25. $5 + 2$ is the same as + 7


26. Write an addition sentence in the box based on the problem given.

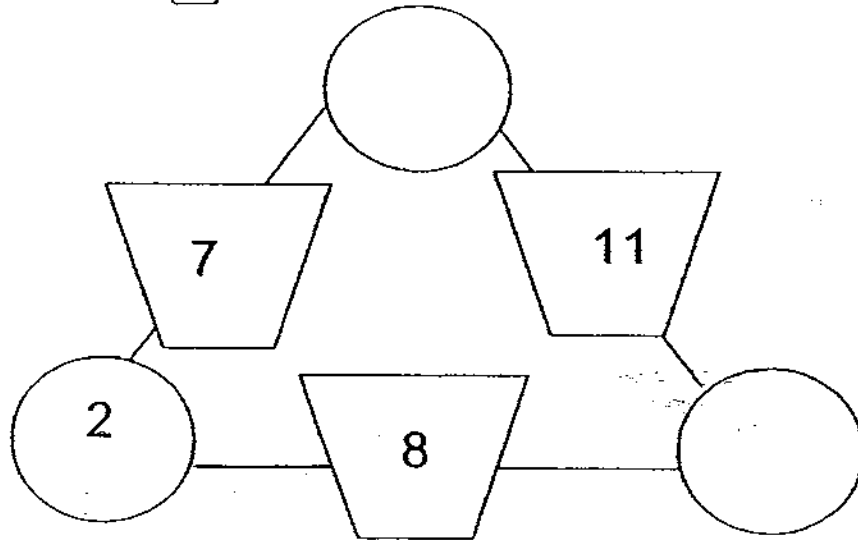


Sarah has _____ cookies on the
plate. She has _____ cookies on
the tray. How many cookies does
Sarah have now?



○ =

27. In the figure below, the numbers in the two circles add up to the number in the  between them. Fill in all the circles.



28. Write a related **subtraction** sentence based on the number sentence below.

$$14 + 3 = 17$$

$$\boxed{} \circ \boxed{} = \boxed{}$$

29. $16 - \boxed{} = 9$

30. Mrs Tan baked 13 cakes. She gave away 4 cakes.
How many cakes had she left?



cakes

31. I am more than 13 but less than 16.
I am not 15.
What am I?

32. Write the missing numbers in the boxes to complete the number pattern

1, 2, 4, 7, , 16

33. Look at the picture below.



Joe

Andy

Joe is 8th in a line going to a party. He is standing in front of Andy.

Andy is

in the line.

34. Look at the picture below.
Ring all the things that have the shape of a rectangle.



mirror



clock



shirt



Photo frame

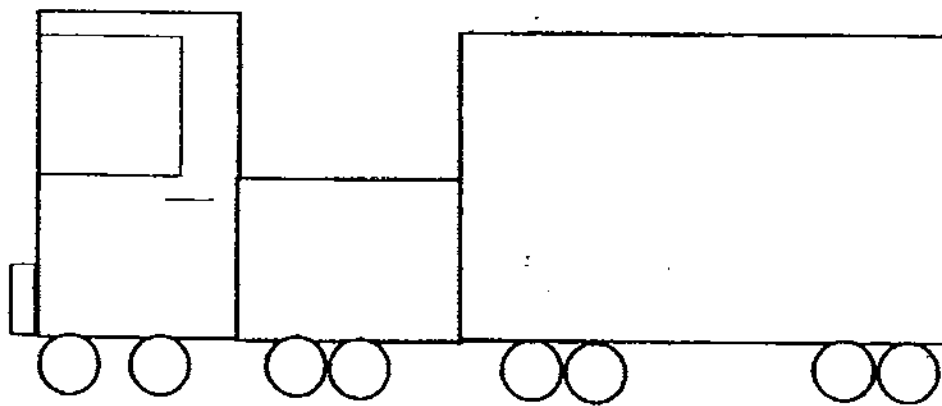


ball



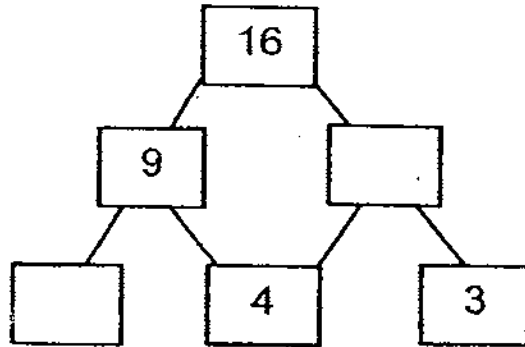
sign

35. Look at the picture below.
Count the number of circles in the picture.

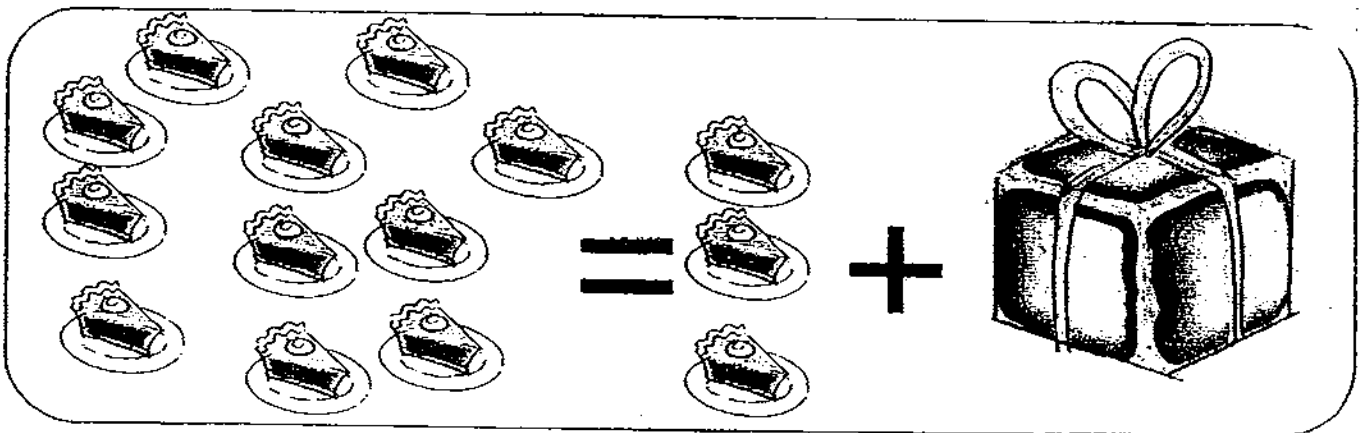


There are circles.

36. Complete the number bond.



37. How many slices of pies are in the box?



pies

38. Study the addition sentences below and solve the problem.

$$\heartsuit + \heartsuit = \smile$$


$$\smile + \smile = 12$$

\heartsuit is

Section B (8 x 3 marks)

Show all your number sentences and working clearly in the spaces provided.


39. Tree A is shorter than Tree B.
Tree C is the tallest.
Label the boxes correctly.



Tree



Tree




Tree

40. There are 4 cookies in a box.
Sammy puts in another 11 cookies.
How many cookies are there in the box now?



There are _____ cookies in the box now.

41. The figure below is made up of 3 shapes. Name the three shapes.

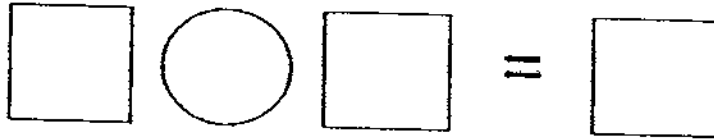


(a) _____

(b) _____

(c) _____

42. David has 12 pens. He has 7 more rulers than pens. How many rulers does he have?



David has _____ rulers.

43. Linda has some apples. She gives 4 apples away to her friends and has 9 apples left. How many apples did she have at first?

Linda has _____ apples at first.

44. Anna has 15 stickers. She gives 3 stickers each to her 2 sisters. How many stickers has she left?

She has _____ stickers left.

45. Mala has 5 letters. Each letter represents some points. Mala made two words "HI" and "MILK". How many points will she get altogether?

K	M	L	I	H
3	2	5	3	4


She will get _____ points altogether.

46. Tom has 13 marbles.
Kelvin has 7 fewer marbles than Tom.
How many marbles do they have in all?

They have _____ marbles in all.

Have you checked your work?

Setters : Mdm N Farhana
Ms Junaidah MY




ANSWER SHEET

EXAM PAPER 2009

**SCHOOL : RAFFLES GIRLS' PRIMARY
SUBJECT : PRIMARY 1 MATHEMATICS**

TERM : SA1

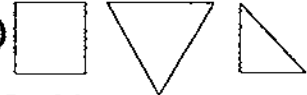


1)6 2)eighteen 3)A 4)6,9,10,12,19 5)second 6)rectangle

7)shorter, longer 8)7 9)Sally 10)fourth 11) $7+5=12$ 12)13

13)8 14) $11-5=6$ 15) $7+11=18$, $11-7=4$ 16)Seventeen

17)the same as 18)11,20 19)2 20)3rd/third 21)



22)  23)Z, X, W, Y 24) \triangle 25)0 26) $2+9=11$

27)5, 6 28) $17-3=14$ 29)7 30)9 31)14 32)11 33)9th

34)mirror, photo frame 35)8 36)7,5 37)8 38)3 39)C, A, B

40) $11+4=15$ 41)a)Triangle b)square c)rectangle

42) $12+7=19$

David has 19 rules.

43) $9+4=13$

Linda has 13 apples at first.

44) $2 \times 3 = 6$

$15 - 6 = 9$

She has 9 stickers left.

45) $4 + 3 = 7$

$2 + 3 + 5 + 3 = 13$

$13 + 7 = 20$

She will get 20 points altogether.

46)No. of marbles Kelvin has $13 - 7$

$= 6$

Total $= 6 + 13 = 19$

They have 19 marbles in all.