



Pei Hwa Presbyterian Primary School
Second Semestral Assessment – 2008
Mathematics
Primary 1
(Time: 1 hour 30 min)

Section	/ 20
Section	/ 60
Section	/ 20
Total	/100

Name: _____

Class: _____

Date: _____

Parent's Signature: _____

Section A: (10 x 2 = 20 marks) Multiple Choice Questions

Choose the correct answer and write its number(1,2,3 or 4) in the brackets provided.

1) 8 , 7 , _____ , 5

What is the missing number in the blank?

(1) 15

(2) 9

(3) 6

(4) 4

()

2) $6 + \underline{\quad} = 8$

(1) 1

(2) 2

(3) 3

(4) 14

()

3) 1 more than 32 is _____.

- (1) 30
- (2) 31
- (3) 33
- (4) 34

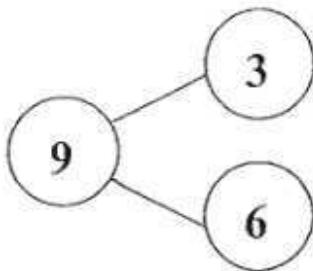
()

4) $45 - 4 = \underline{\quad}$

- (1) 5
- (2) 41
- (3) 42
- (4) 49

()

5)

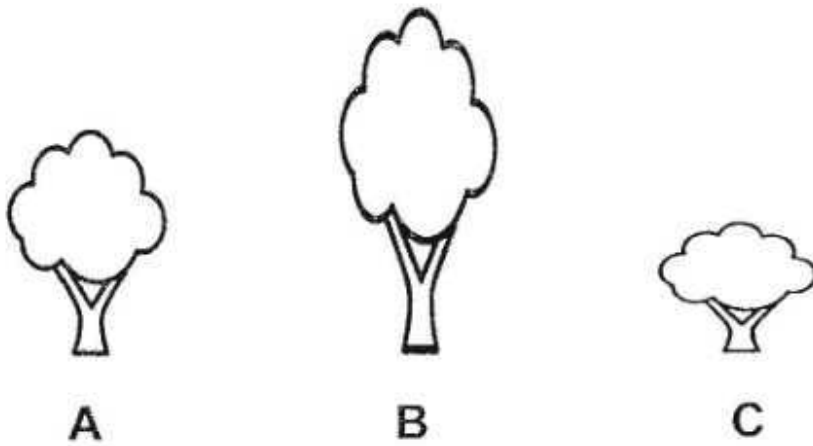


Write a subtraction sentence using the above number bond.

- (1) $3 + 6 = 9$
- (2) $6 - 3 = 3$
- (3) $9 + 3 = 12$
- (4) $9 - 6 = 3$

()

6)




Which of the following sentence about the trees above is correct?

- (1) Tree A is taller than Tree B but shorter than Tree C.
- (2) Tree A is shorter than Tree B but taller than Tree C.
- (3) Tree B is shorter than Tree A but taller than Tree C.
- (4) Tree C is taller than Tree A but shorter than Tree B.

()

7)



The number of dots is _____ the number of triangles.

- (1) 1 more than
- (2) 2 more than
- (3) the same as
- (4) less than

()

8) 7 tens 6 ones + 1 ten 2 ones = _____

(1) 64

(2) 68

(3) 88

(4) 89

()

9) Arrange these numbers from the greatest to the smallest.

14 , 3 , 17 , 11 , 9

(1) 3 , 11 , 9 , 14 , 17

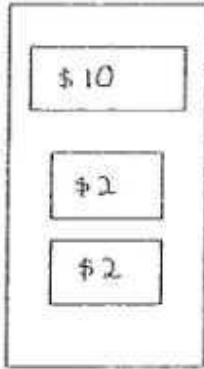
(2) 3 , 9 , 11 , 14 , 17

(3) 17 , 11 , 14 , 3 , 9

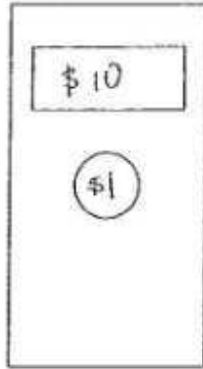
(4) 17 , 14 , 11 , 9 , 3

()

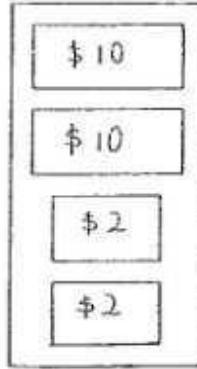
10) Set A



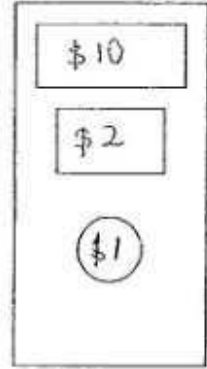
Set B



Set C



Set D



Set _____ has the **greatest** amount of money.

- (1) A
- (2) B
- (3) C
- (4) D

()

Section B : (30 x 2 = 60marks) Write your answers in the blanks provided. Show your working clearly in the space provided below each question.

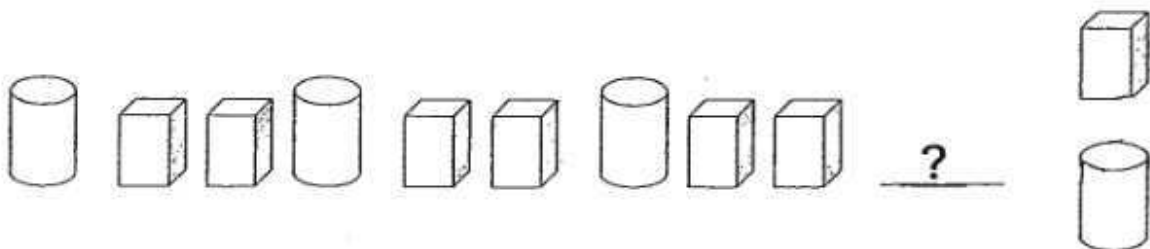
11) 3 and _____ make 7.

12) **Circle** the correct word.
18 is (greater / smaller) than 15.


13) Fill in the missing numbers in the blanks below.

11 , _____ , _____ , 17 , 19

14) **Circle** the solid that comes next in this pattern.

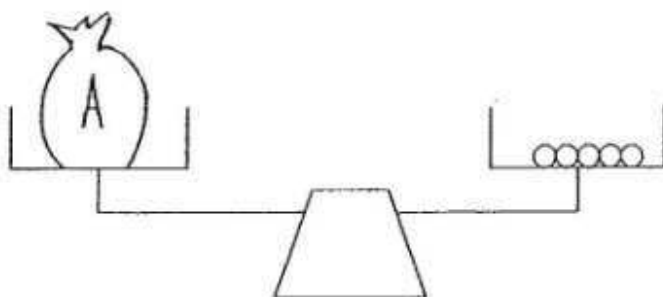


15) Take \square as 1 unit.




The height of the tree is about _____ units.

16) Use \circ as 1 unit.




The mass of bag A is _____ units.

17)



Set A



Set B

Circle the correct word.

Set A has (more / fewer) marbles than set B.

18) Write in words.

43 _____

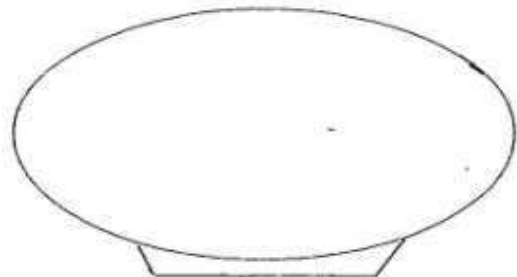
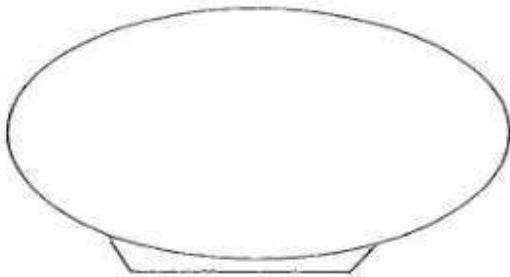

19) $52 + 7 =$ _____

20)




4 twos = _____

21) Draw an equal number of circles on each of the 2 plates.

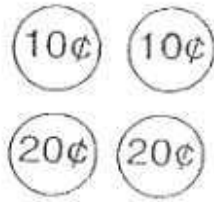


22) What is the time shown below?



The time shown on the clock face above is _____.

23)

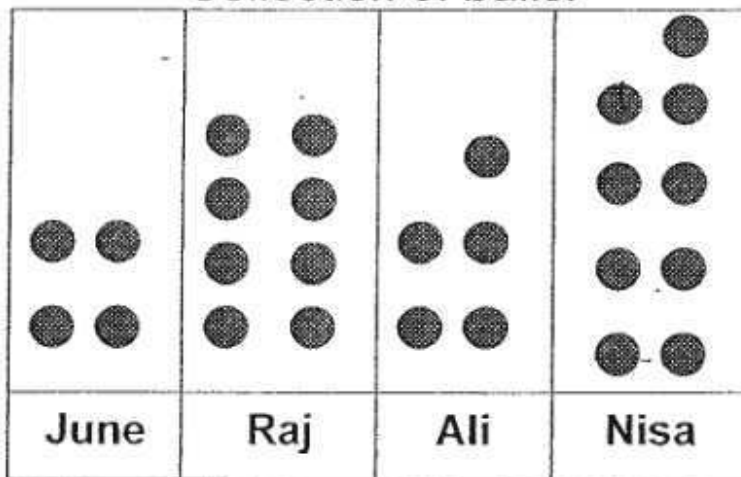


The amount of money shown above is _____.

The graph below shows the number of balls collected by 4 children.

Study it carefully and answer questions 24 and 25.

Collection of balls.



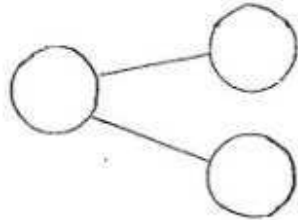
Each ● stands for 1 ball.

24) Raj has _____ balls.

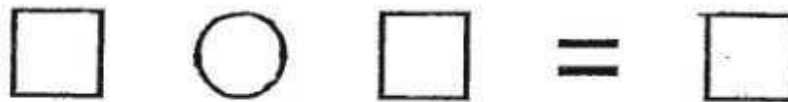
25) Ali has _____ fewer balls than Nisa.

26) Use these 3 numbers to make a number bond.

3, 8, 5



27) Look at the picture and write an addition sentence for it.



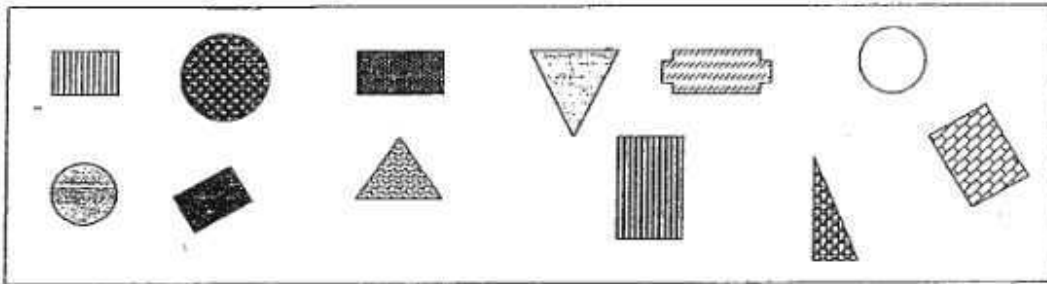
28) Write the missing number in the blank.

$$\underline{\quad} - 5 = 2$$

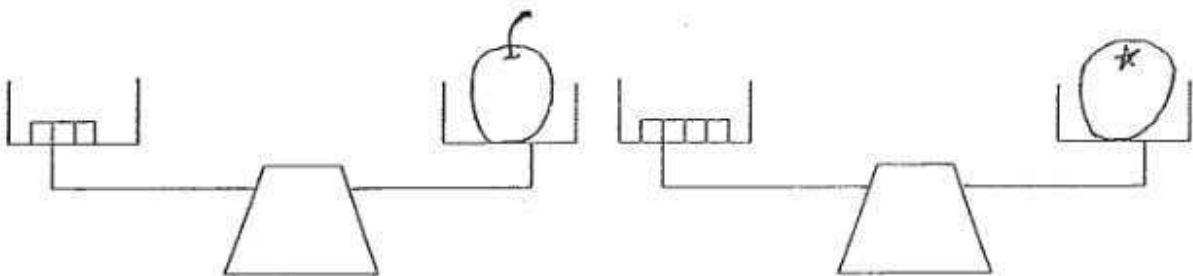
29) Circle the 3rd object from the right.



30) There are _____ more rectangles than triangles.



31)





Take \square as 1 unit.

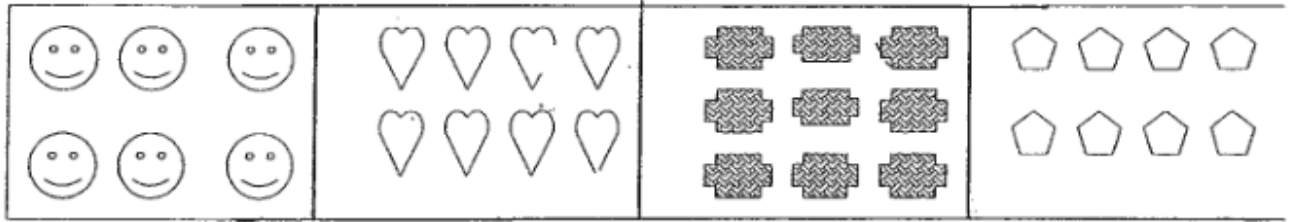
The apple is _____ unit(s) lighter than the orange.

32) _____ is 10 more than 6 tens 4 ones.

33) Match the correct clock face to the correct box.



34) Circle the sets that show the same number.



35) I have 2 apples.

I have 6 more oranges than apples.

How many fruits do I have altogether?

Answer : _____

36) Tom has 20 marks for spelling.

Ming has 5 marks less than Tom for spelling.

Sue has 4 marks for spelling.

How many marks do Ming and Sue score altogether?

Answer : _____

37) _____ is 2 less than 10.

38) $84 = 7$ tens _____ ones

39) Fill in the missing number.

$$\begin{array}{r} 47 \\ + 3\boxed{} \\ \hline 85 \end{array}$$

40) At a playground, there are **more** bicycles than tricycles.
Tom counted 12 wheels in all the bicycles and tricycles.
How many bicycles and tricycles are there at the playground?
(A bicycle has 2 wheels and a tricycle has 3 wheels.)

Answer : _____ bicycles _____ tricycles

Section C (5 x 4 = 20 marks)

Show your working clearly in the space provided below each question .

41) There are 42 oranges in a box.

Mrs Tan sold 18 oranges.

How many oranges are left?

Working

$$\square \bigcirc \square = \square$$

There are _____ oranges left.

42) Look at the picture and write a multiplication sentence.

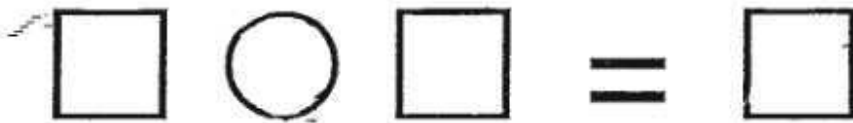


$$\square \bigcirc \square = \square$$

43) John gives away 4 sweets.

He has 7 sweets left.

How many sweets does he have at first?




He has _____ sweets at first.

44) Mrs Lee has 21 pencils.

She gives them equally to her 3 children.

Circle the pencils into 3 groups.



Each child gets _____ pencils.

45) Mum bought some meat for \$6.

She gives the cashier \$10.

How much is her change?

$$\square \quad \bigcirc \quad \square \quad = \quad \square$$

Her change is \$ _____

Working

-----End of Paper-----

☉ Have you checked your work?




ANSWER SHEET

EXAM PAPER 2008

SCHOOL : PEI HWA PRIMARY SCHOOL
SUBJECT : PRIMARY 1 MATHEMATICS

TERM : SA 2

Q1	Q2	Q3	Q4	Q5	Q6	Q7	Q8	Q9	Q10
3	2	3	2	4	2	2	3	4	3

11)4 12)greater 13)13,15 14)  15)6 16)5

17)fewer 18)forty-three 19)59 20)8

21)   22)3 o'clock 23)60 cent

24)8 25)4 26)  27)4+5=9 28)7

29)scissor 30)2 

31)1 32)74

33)  34)   35)10

36)19 37)8 38)14 39)8 40)3 bicycles 2 tricycles

41) $42 - 18 = 24$

There are 24 oranges left.

42) $4 \times 5 = 20$

43) $7 + 4 = 11$

He had 11 sweets at first.

44) $21 \div 3 = 7$

Each child gets 7 pencils.

45) $10 - 6 = 4$

Her change is \$4.